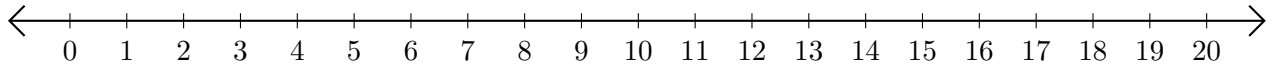


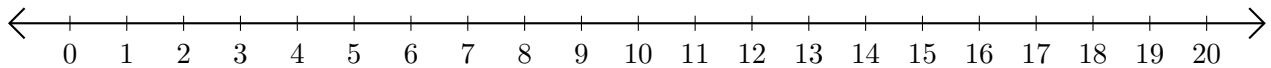
Subtracting on Number Lines (H)

Use the number lines to calculate each difference.

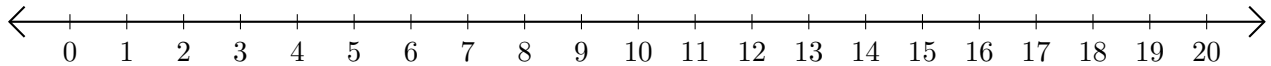
1. $12 - 8 = \underline{\quad}$



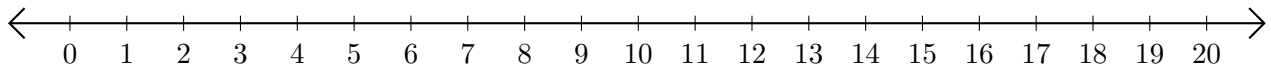
2. $20 - 10 = \underline{\quad}$



3. $19 - 16 = \underline{\quad}$



4. $18 - 17 = \underline{\quad}$



5. $17 - 11 = \underline{\quad}$

