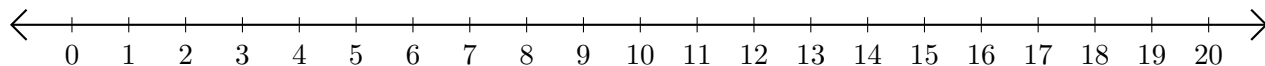


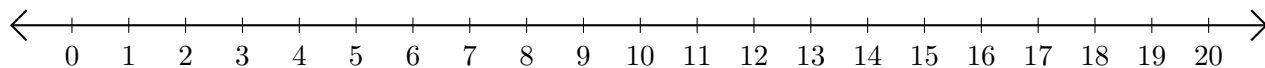
## Subtracting on Number Lines (F)

Use the number lines to calculate each difference.

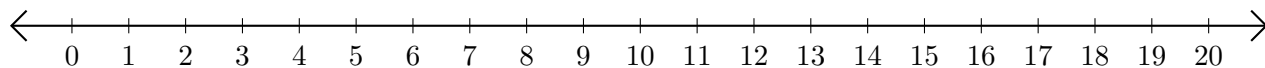
1.  $20 - 15 = \underline{\quad}$



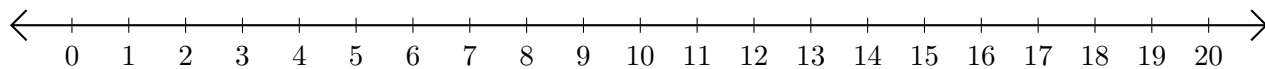
2.  $15 - 4 = \underline{\quad}$



3.  $20 - 18 = \underline{\quad}$



4.  $8 - 2 = \underline{\quad}$



5.  $16 - 14 = \underline{\quad}$

