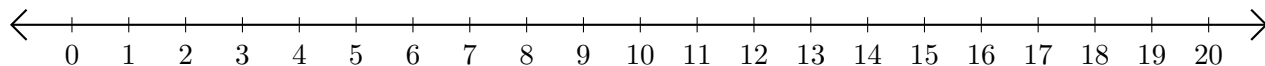


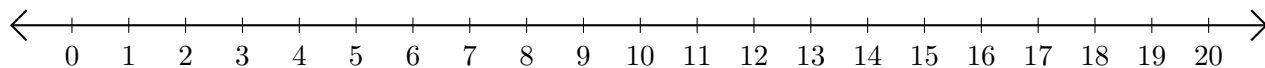
Subtracting on Number Lines (F)

Use the number lines to calculate each difference.

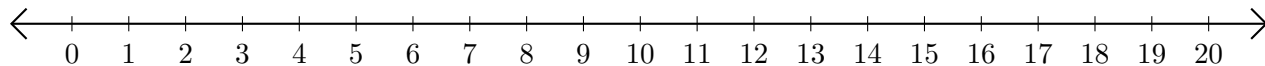
1. $20 - 15 = \underline{\quad}$



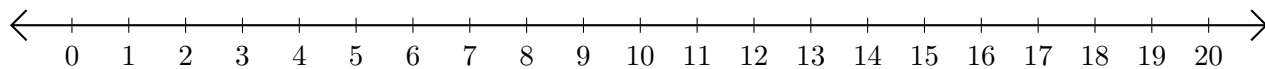
2. $15 - 4 = \underline{\quad}$



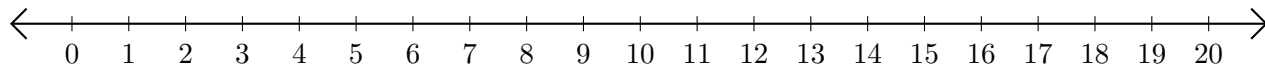
3. $20 - 18 = \underline{\quad}$



4. $8 - 2 = \underline{\quad}$



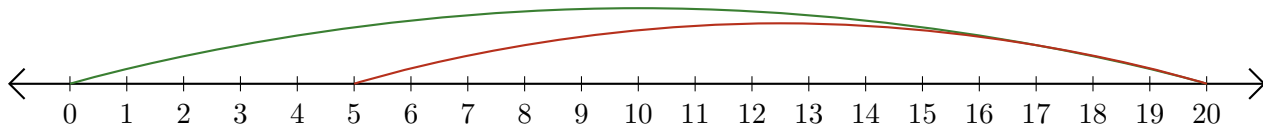
5. $16 - 14 = \underline{\quad}$



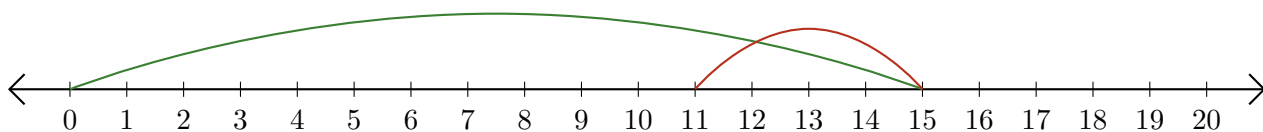
Subtracting on Number Lines (F) Answers

Use the number lines to calculate each difference.

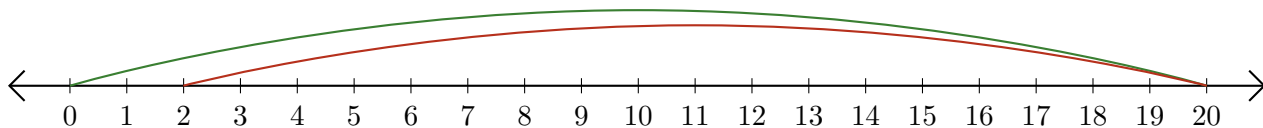
1. $20 - 15 = \underline{5}$



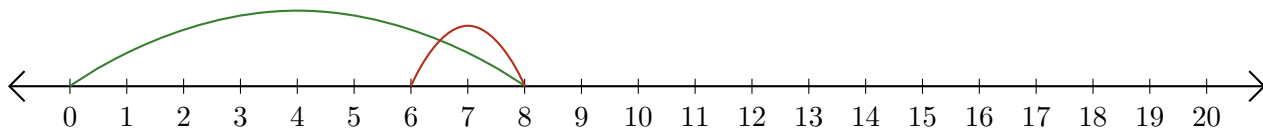
2. $15 - 4 = \underline{11}$



3. $20 - 18 = \underline{2}$



4. $8 - 2 = \underline{6}$



5. $16 - 14 = \underline{2}$

