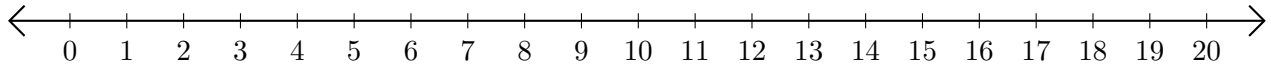


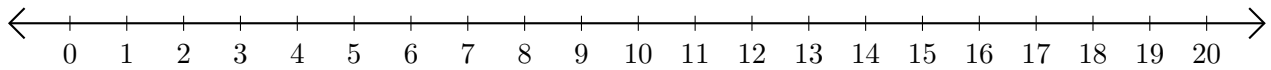
# Subtracting on Number Lines (D)

Use the number lines to calculate each difference.

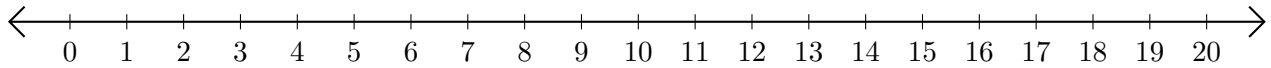
1.  $18 - 12 = \underline{\quad}$



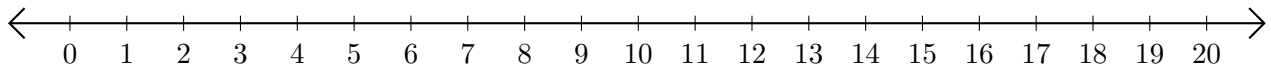
2.  $7 - 3 = \underline{\quad}$



3.  $20 - 13 = \underline{\quad}$



4.  $12 - 4 = \underline{\quad}$



5.  $16 - 9 = \underline{\quad}$

