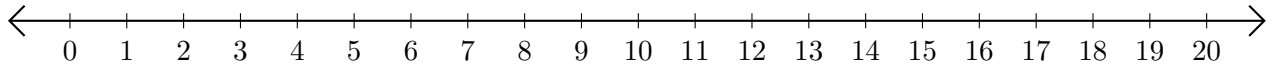


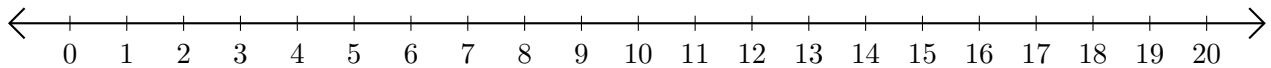
Subtracting on Number Lines (D)

Use the number lines to calculate each difference.

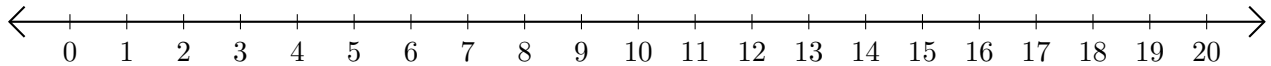
1. $18 - 12 = \underline{\quad}$



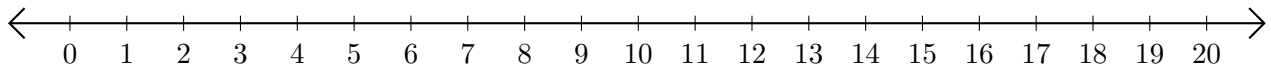
2. $7 - 3 = \underline{\quad}$



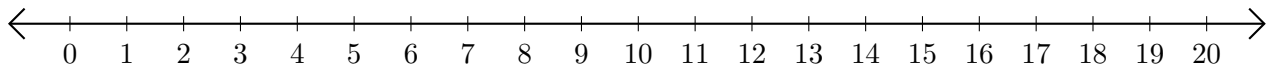
3. $20 - 13 = \underline{\quad}$



4. $12 - 4 = \underline{\quad}$



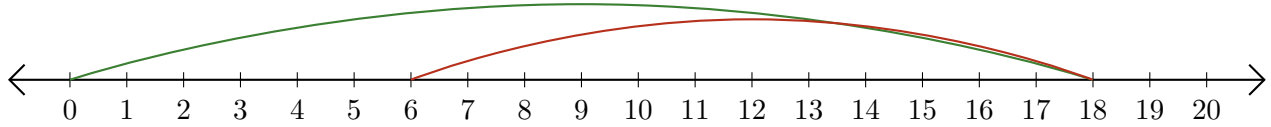
5. $16 - 9 = \underline{\quad}$



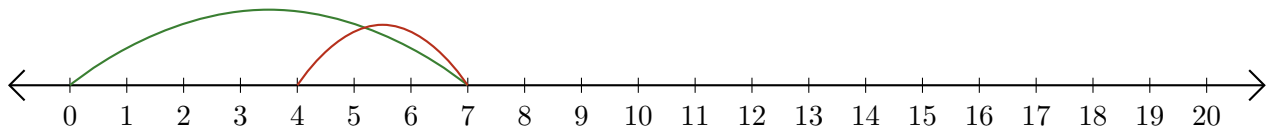
Subtracting on Number Lines (D) Answers

Use the number lines to calculate each difference.

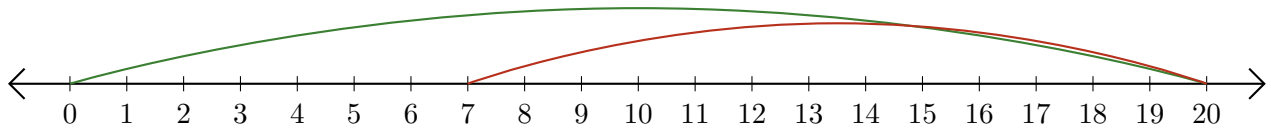
1. $18 - 12 = \underline{6}$



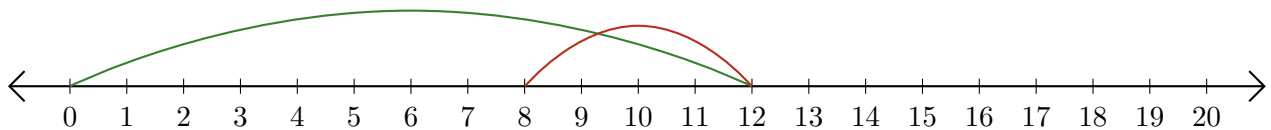
2. $7 - 3 = \underline{4}$



3. $20 - 13 = \underline{7}$



4. $12 - 4 = \underline{8}$



5. $16 - 9 = \underline{7}$

