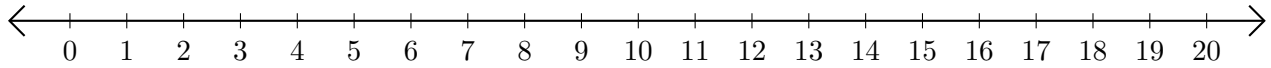


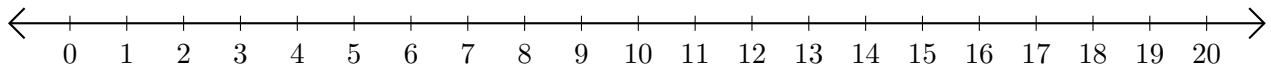
Subtracting on Number Lines (A)

Use the number lines to calculate each difference.

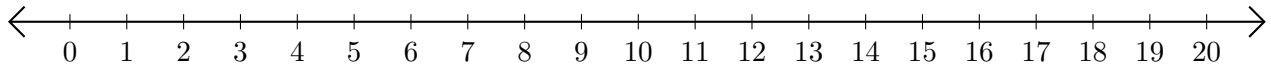
1. $19 - 6 = \underline{\quad}$



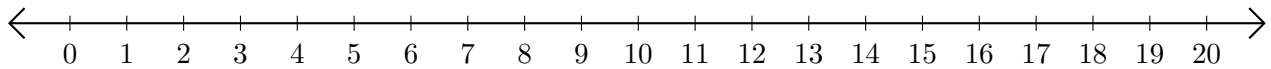
2. $18 - 4 = \underline{\quad}$



3. $20 - 19 = \underline{\quad}$



4. $19 - 18 = \underline{\quad}$



5. $14 - 9 = \underline{\quad}$

