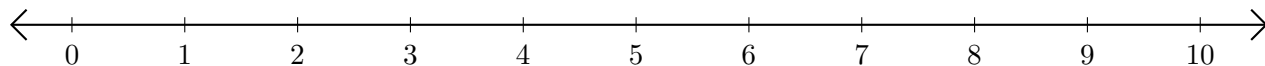


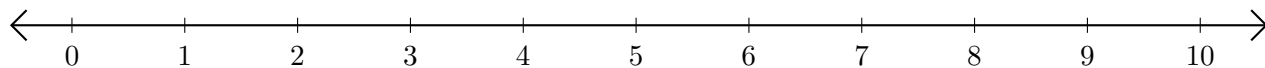
Subtracting on Number Lines (B)

Use the number lines to calculate each difference.

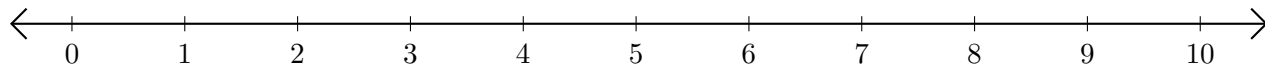
1. $10 - 8 = \underline{\quad}$



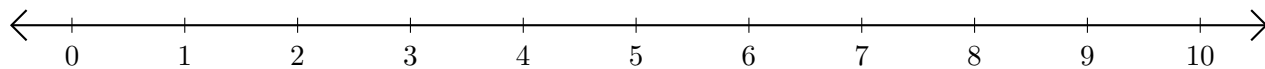
2. $10 - 9 = \underline{\quad}$



3. $4 - 2 = \underline{\quad}$



4. $5 - 4 = \underline{\quad}$



5. $9 - 7 = \underline{\quad}$

