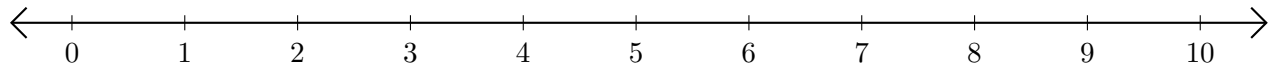


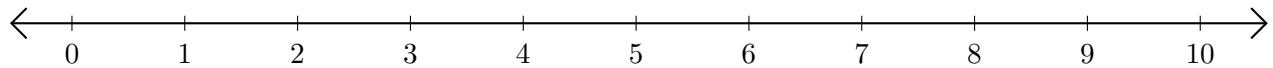
## Subtracting on Number Lines (B)

Use the number lines to calculate each difference.

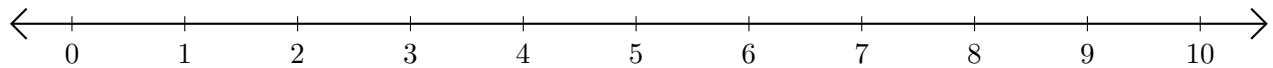
1.  $10 - 8 = \underline{\quad}$



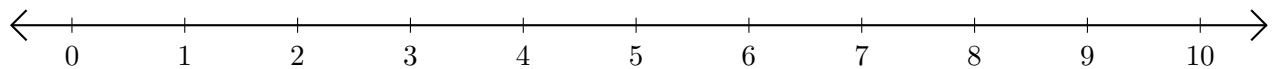
2.  $10 - 9 = \underline{\quad}$



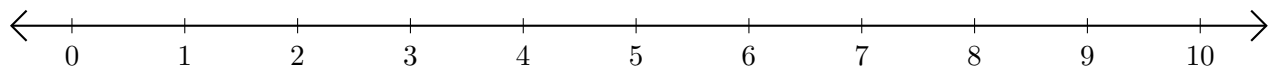
3.  $4 - 2 = \underline{\quad}$



4.  $5 - 4 = \underline{\quad}$



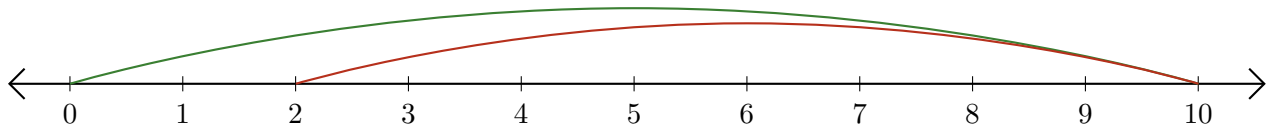
5.  $9 - 7 = \underline{\quad}$



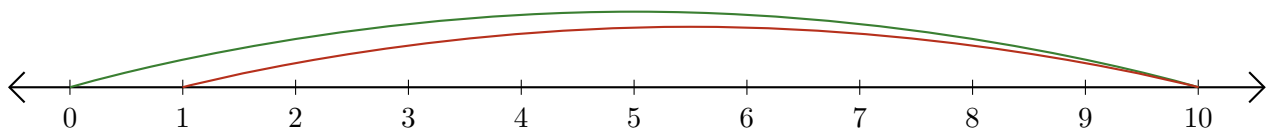
# Subtracting on Number Lines (B) Answers

Use the number lines to calculate each difference.

1.  $10 - 8 = \underline{2}$



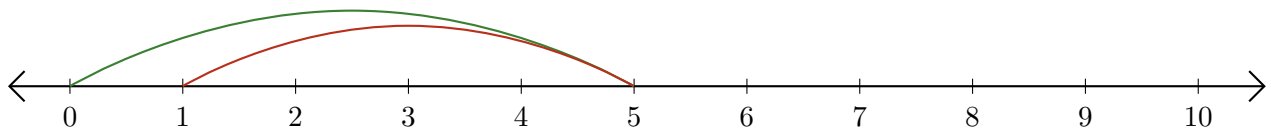
2.  $10 - 9 = \underline{1}$



3.  $4 - 2 = \underline{2}$



4.  $5 - 4 = \underline{1}$



5.  $9 - 7 = \underline{2}$

