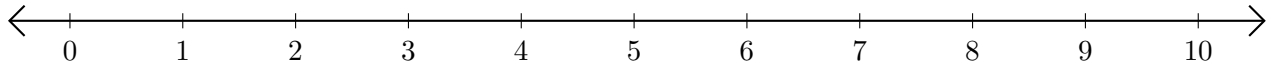


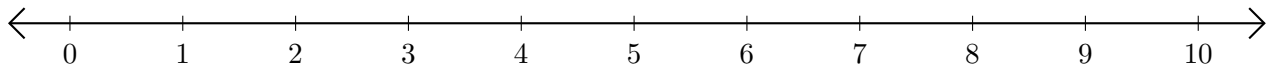
Subtracting on Number Lines (A)

Use the number lines to calculate each difference.

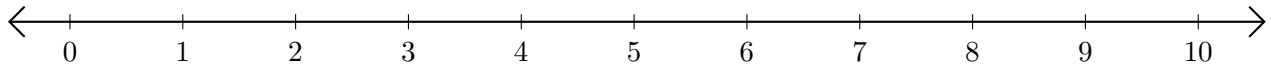
1. $5 - 1 = \underline{\quad}$



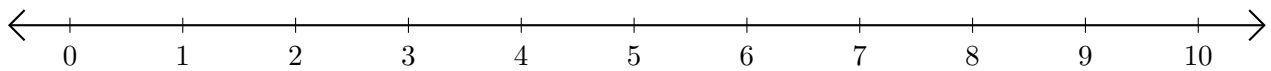
2. $7 - 6 = \underline{\quad}$



3. $8 - 2 = \underline{\quad}$



4. $6 - 5 = \underline{\quad}$



5. $9 - 8 = \underline{\quad}$

