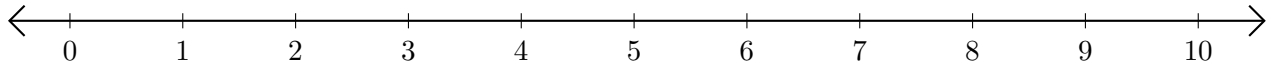


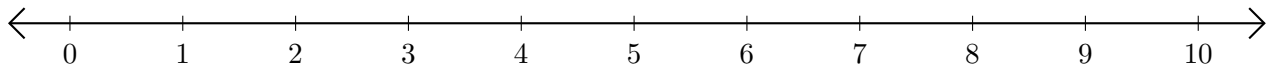
# Subtracting on Number Lines (A)

Use the number lines to calculate each difference.

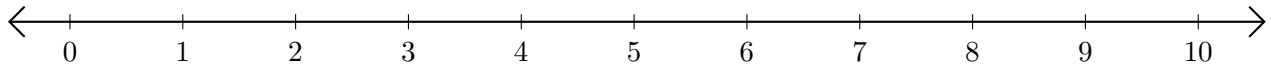
1.  $5 - 1 = \underline{\quad}$



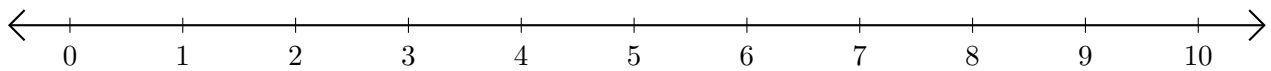
2.  $7 - 6 = \underline{\quad}$



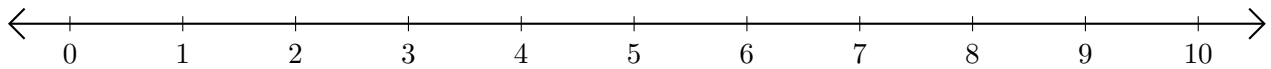
3.  $8 - 2 = \underline{\quad}$



4.  $6 - 5 = \underline{\quad}$



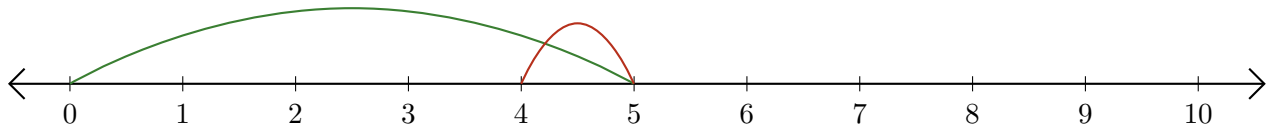
5.  $9 - 8 = \underline{\quad}$



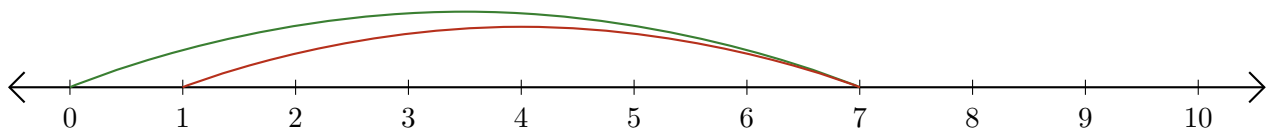
# Subtracting on Number Lines (A) Answers

Use the number lines to calculate each difference.

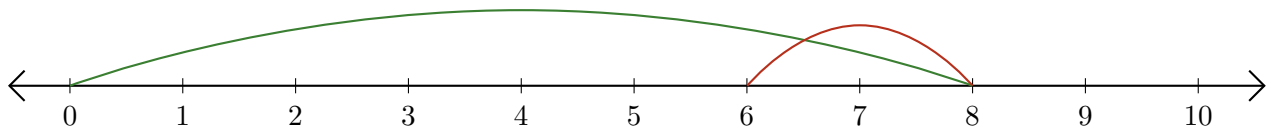
1.  $5 - 1 = \underline{4}$



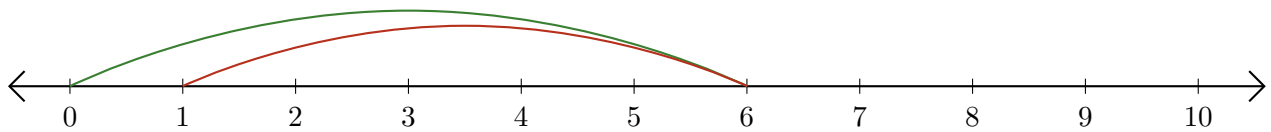
2.  $7 - 6 = \underline{1}$



3.  $8 - 2 = \underline{6}$



4.  $6 - 5 = \underline{1}$



5.  $9 - 8 = \underline{1}$

