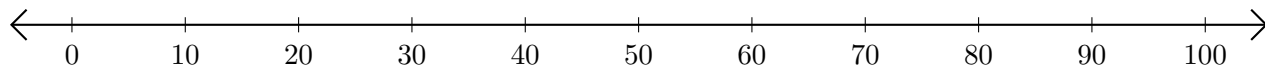


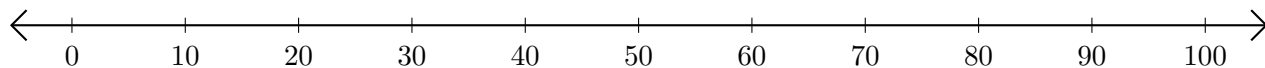
Adding and Subtracting on Number Lines (H)

Use the number lines to calculate each sum or difference.

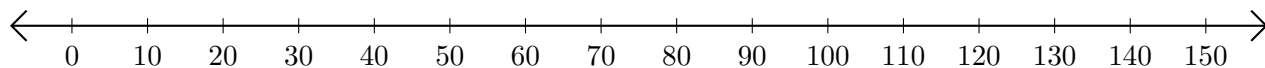
1. $50 + 40 = \underline{\quad}$



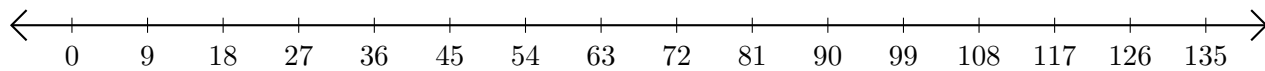
2. $80 - 40 = \underline{\quad}$



3. $40 + 70 = \underline{\quad}$



4. $135 - 117 = \underline{\quad}$



5. $12 + 2 = \underline{\quad}$

