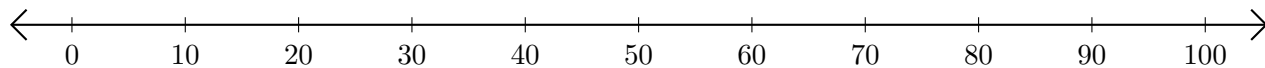


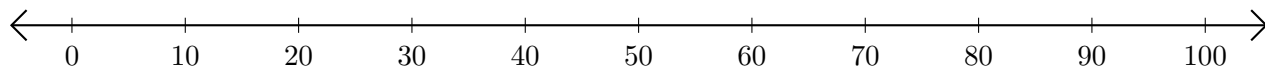
Adding and Subtracting on Number Lines (H)

Use the number lines to calculate each sum or difference.

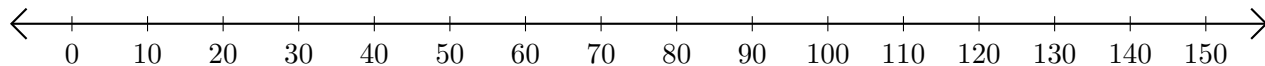
1. $50 + 40 = \underline{\quad}$



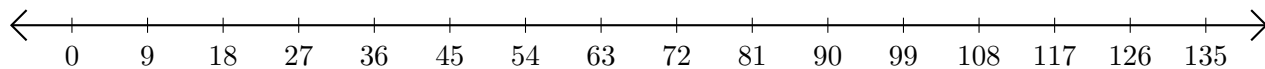
2. $80 - 40 = \underline{\quad}$



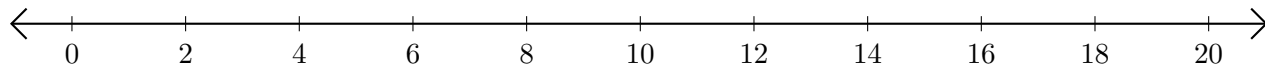
3. $40 + 70 = \underline{\quad}$



4. $135 - 117 = \underline{\quad}$



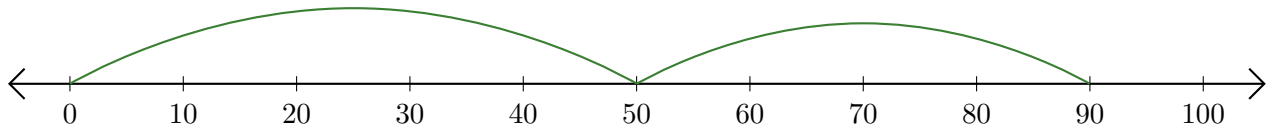
5. $12 + 2 = \underline{\quad}$



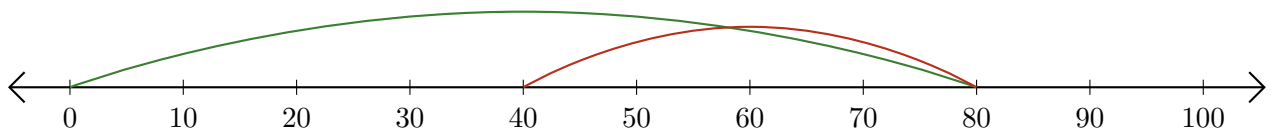
Adding and Subtracting on Number Lines (H) Answers

Use the number lines to calculate each sum or difference.

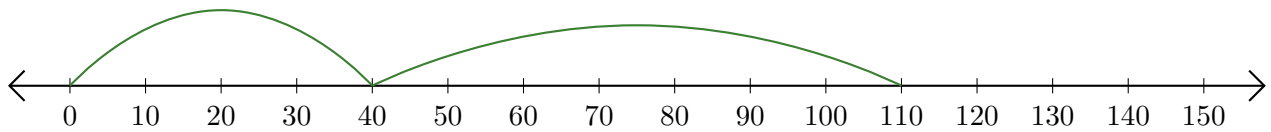
1. $50 + 40 = \underline{90}$



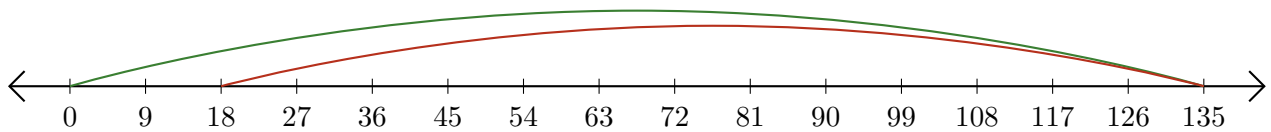
2. $80 - 40 = \underline{40}$



3. $40 + 70 = \underline{110}$



4. $135 - 117 = \underline{18}$



5. $12 + 2 = \underline{14}$

