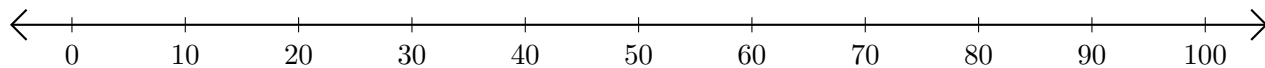


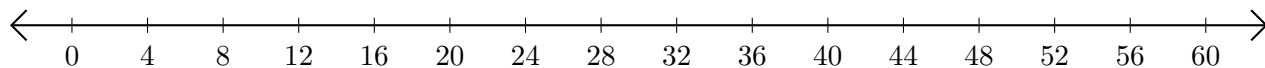
Adding and Subtracting on Number Lines (G)

Use the number lines to calculate each sum or difference.

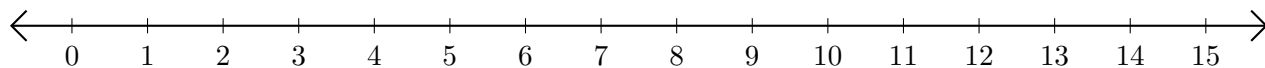
1. $60 + 30 = \underline{\quad}$



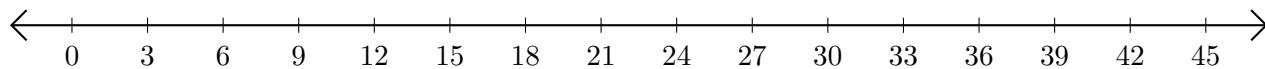
2. $28 - 24 = \underline{\quad}$



3. $9 + 5 = \underline{\quad}$



4. $30 - 24 = \underline{\quad}$



5. $8 + 2 = \underline{\quad}$

