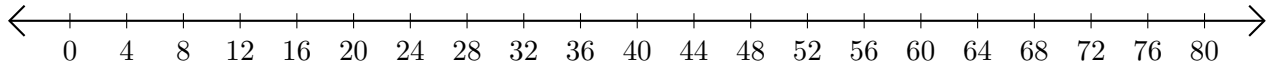


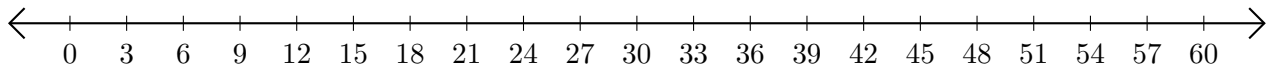
Adding and Subtracting on Number Lines (E)

Use the number lines to calculate each sum or difference.

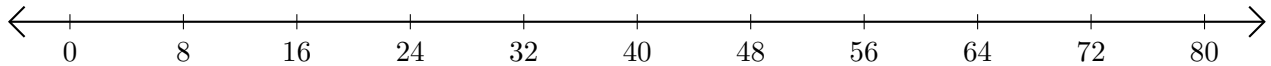
1. $44 + 16 = \underline{\quad}$



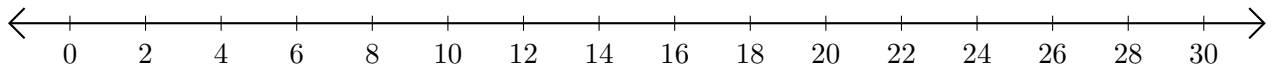
2. $48 - 27 = \underline{\quad}$



3. $8 + 40 = \underline{\quad}$



4. $12 - 2 = \underline{\quad}$



5. $10 + 40 = \underline{\quad}$

