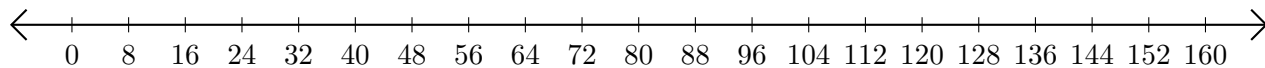


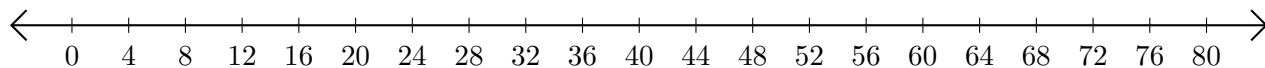
Adding and Subtracting on Number Lines (D)

Use the number lines to calculate each sum or difference.

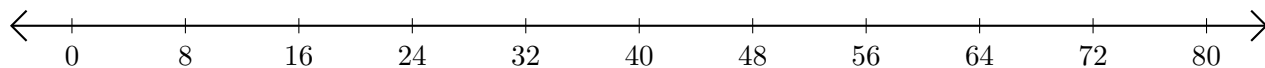
1. $24 + 24 = \underline{\quad}$



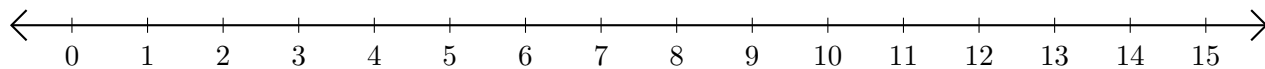
2. $80 - 76 = \underline{\quad}$



3. $56 + 24 = \underline{\quad}$



4. $15 - 14 = \underline{\quad}$



5. $126 + 9 = \underline{\quad}$

