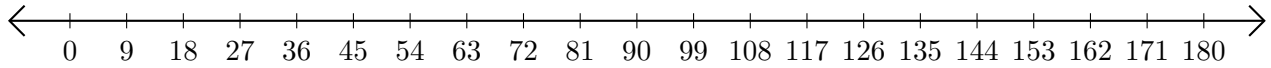


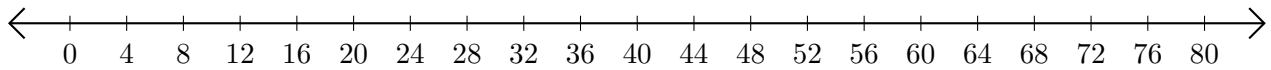
Adding and Subtracting on Number Lines (C)

Use the number lines to calculate each sum or difference.

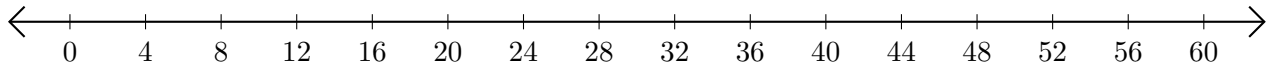
1. $81 + 45 = \underline{\quad}$



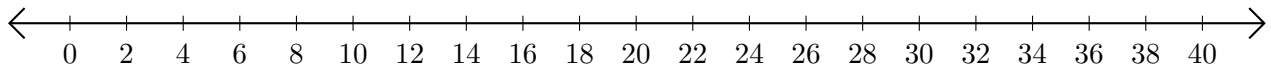
2. $56 - 4 = \underline{\quad}$



3. $52 + 8 = \underline{\quad}$



4. $40 - 26 = \underline{\quad}$



5. $57 - 51 = \underline{\quad}$

