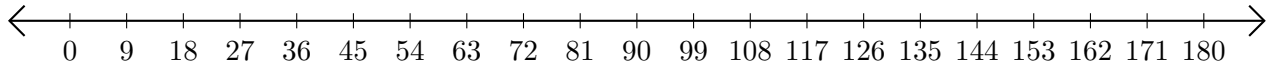


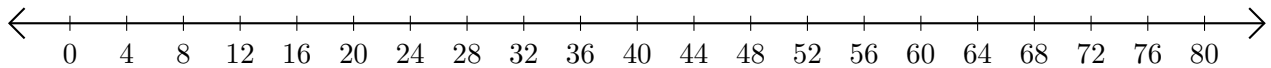
Adding and Subtracting on Number Lines (C)

Use the number lines to calculate each sum or difference.

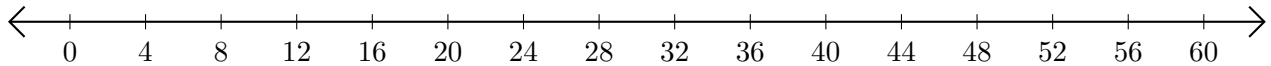
1. $81 + 45 = \underline{\hspace{2cm}}$



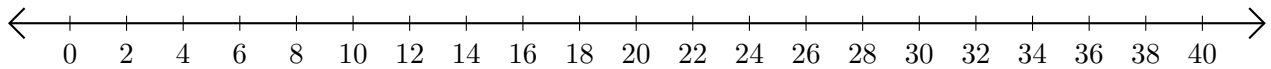
2. $56 - 4 = \underline{\hspace{2cm}}$



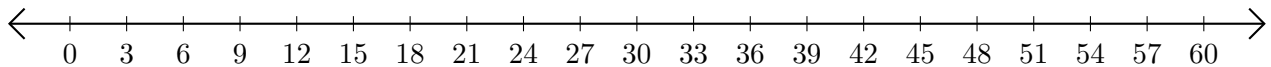
3. $52 + 8 = \underline{\hspace{2cm}}$



4. $40 - 26 = \underline{\hspace{2cm}}$



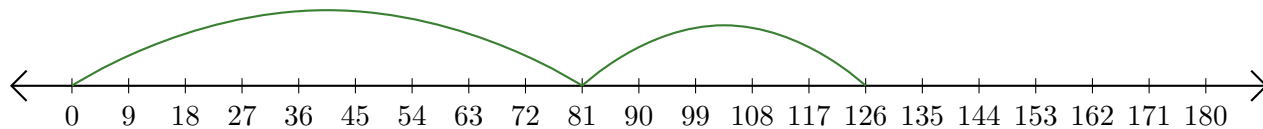
5. $57 - 51 = \underline{\hspace{2cm}}$



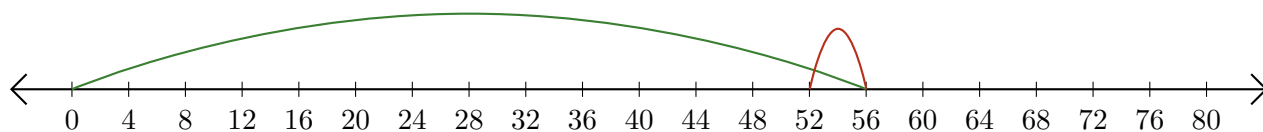
Adding and Subtracting on Number Lines (C) Answers

Use the number lines to calculate each sum or difference.

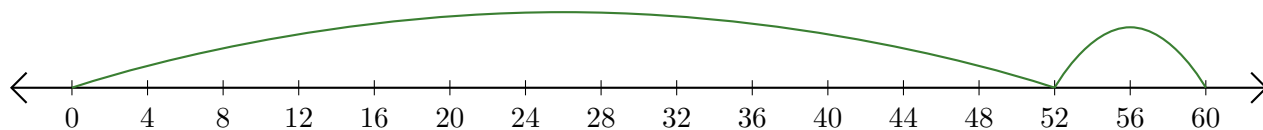
1. $81 + 45 = \underline{126}$



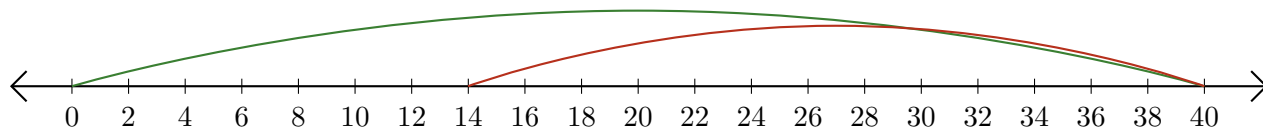
2. $56 - 4 = \underline{52}$



3. $52 + 8 = \underline{60}$



4. $40 - 26 = \underline{14}$



5. $57 - 51 = \underline{6}$

