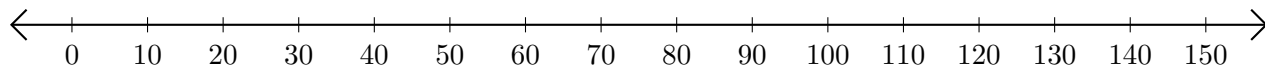


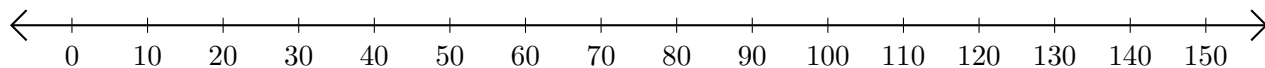
Adding and Subtracting on Number Lines (J)

Use the number lines to calculate each sum or difference.

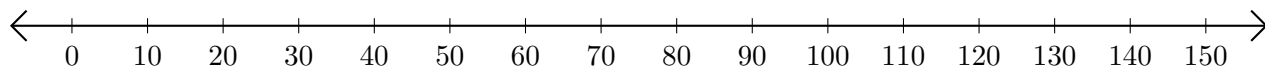
1. $130 + 20 = \underline{\hspace{2cm}}$



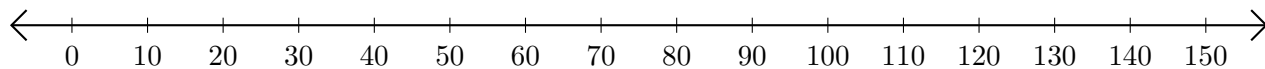
2. $140 - 70 = \underline{\hspace{2cm}}$



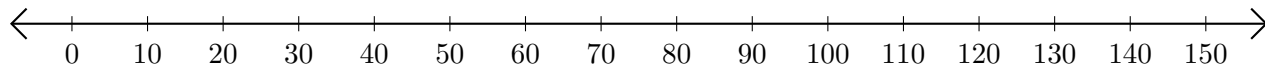
3. $100 + 50 = \underline{\hspace{2cm}}$



4. $60 - 30 = \underline{\hspace{2cm}}$



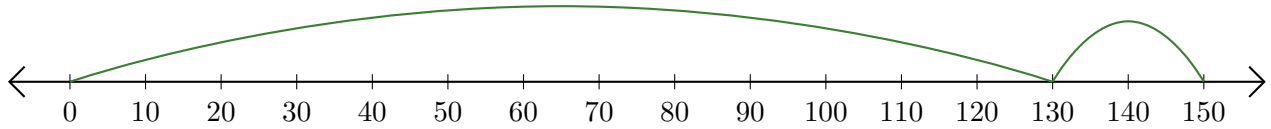
5. $140 + 10 = \underline{\hspace{2cm}}$



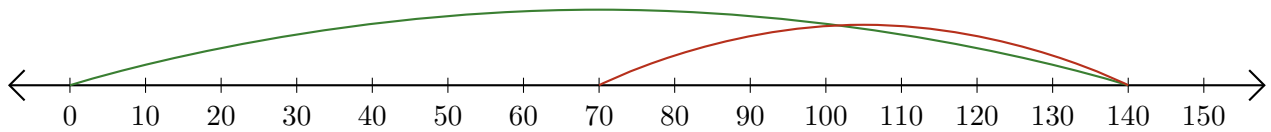
Adding and Subtracting on Number Lines (J) Answers

Use the number lines to calculate each sum or difference.

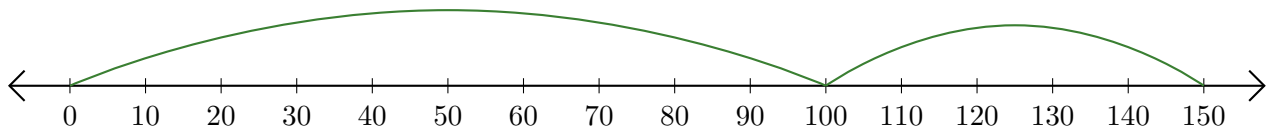
1. $130 + 20 = \underline{150}$



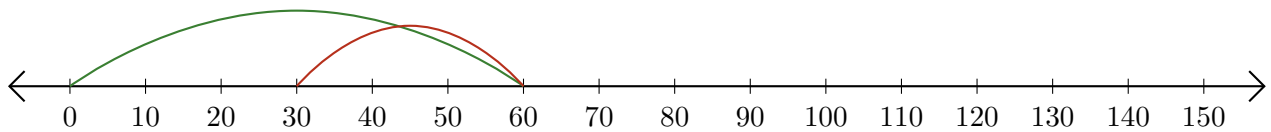
2. $140 - 70 = \underline{70}$



3. $100 + 50 = \underline{150}$



4. $60 - 30 = \underline{30}$



5. $140 + 10 = \underline{150}$

