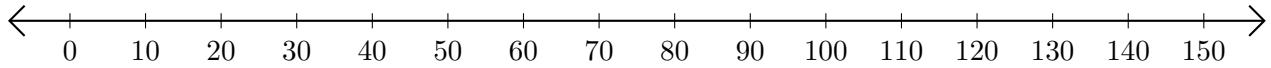


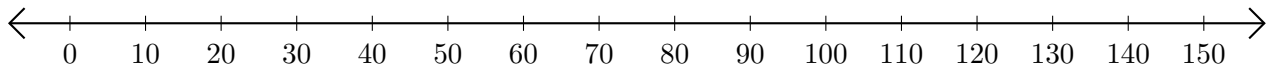
# Adding and Subtracting on Number Lines (I)

Use the number lines to calculate each sum or difference.

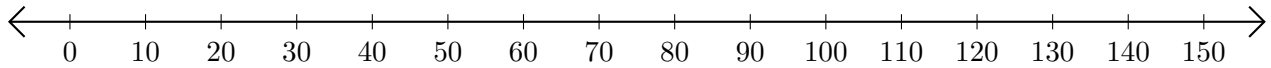
1.  $140 + 10 = \underline{\hspace{2cm}}$



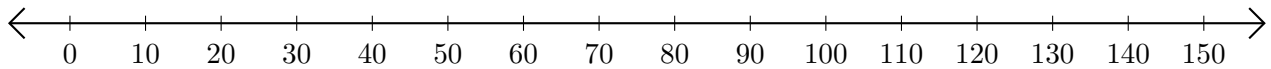
2.  $100 - 50 = \underline{\hspace{2cm}}$



3.  $90 + 50 = \underline{\hspace{2cm}}$



4.  $140 - 100 = \underline{\hspace{2cm}}$



5.  $100 - 40 = \underline{\hspace{2cm}}$

