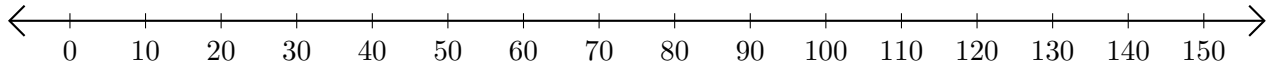


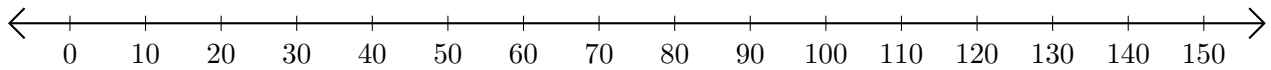
Adding and Subtracting on Number Lines (I)

Use the number lines to calculate each sum or difference.

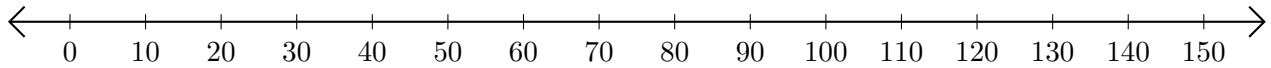
1. $140 + 10 = \underline{\hspace{2cm}}$



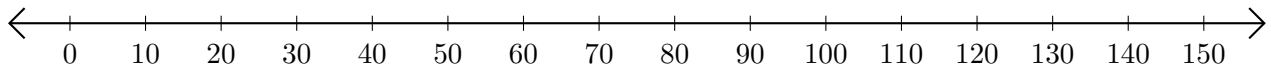
2. $100 - 50 = \underline{\hspace{2cm}}$



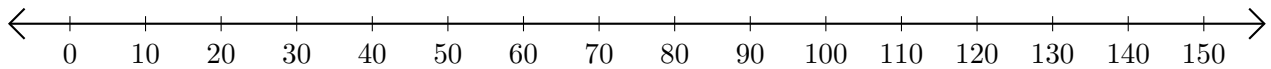
3. $90 + 50 = \underline{\hspace{2cm}}$



4. $140 - 100 = \underline{\hspace{2cm}}$



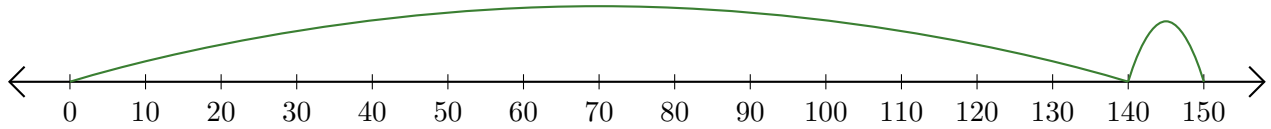
5. $100 - 40 = \underline{\hspace{2cm}}$



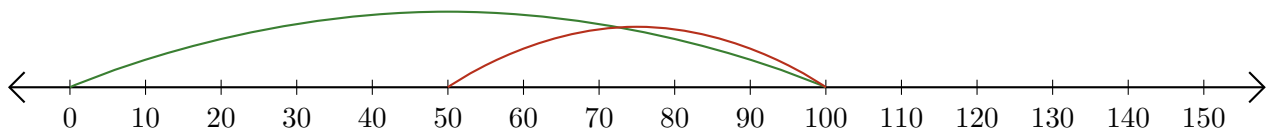
Adding and Subtracting on Number Lines (I) Answers

Use the number lines to calculate each sum or difference.

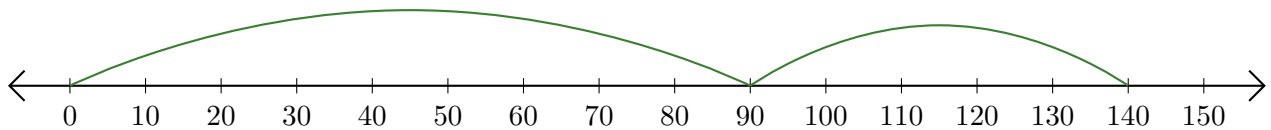
1. $140 + 10 = \underline{150}$



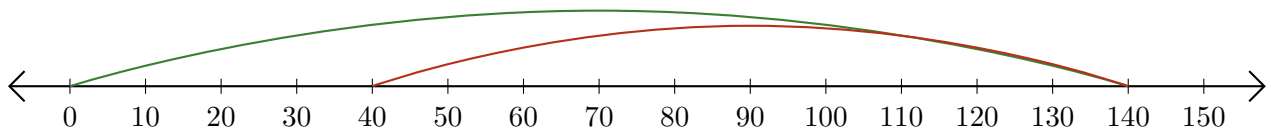
2. $100 - 50 = \underline{50}$



3. $90 + 50 = \underline{140}$



4. $140 - 100 = \underline{40}$



5. $100 - 40 = \underline{60}$

