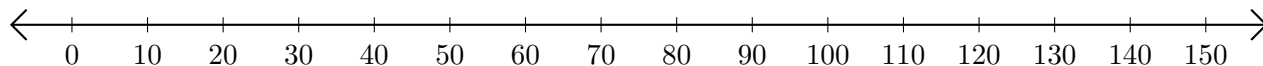


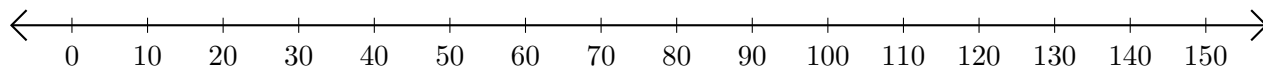
Adding and Subtracting on Number Lines (G)

Use the number lines to calculate each sum or difference.

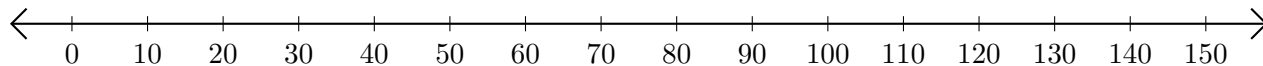
1. $70 + 70 = \underline{\quad}$



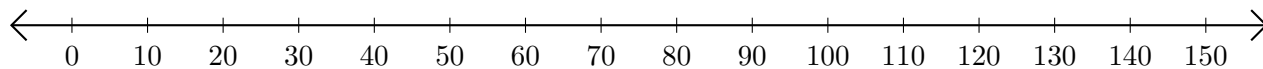
2. $140 - 120 = \underline{\quad}$



3. $100 + 20 = \underline{\quad}$



4. $150 - 130 = \underline{\quad}$



5. $80 + 40 = \underline{\quad}$

