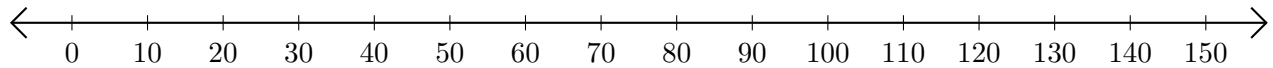


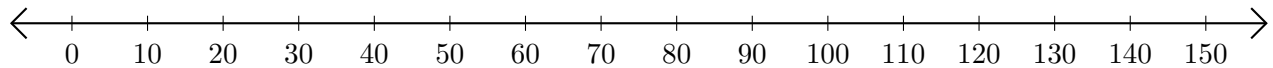
Adding and Subtracting on Number Lines (F)

Use the number lines to calculate each sum or difference.

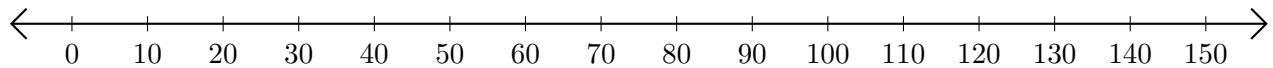
1. $120 + 30 = \underline{\quad}$



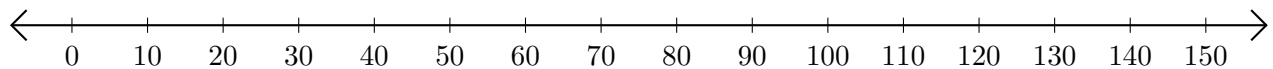
2. $60 - 50 = \underline{\quad}$



3. $10 + 140 = \underline{\quad}$



4. $150 - 90 = \underline{\quad}$



5. $140 - 110 = \underline{\quad}$

