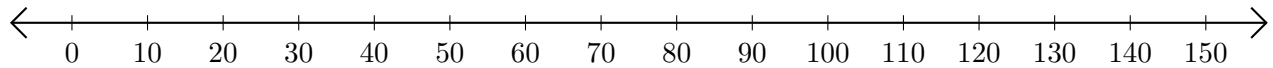


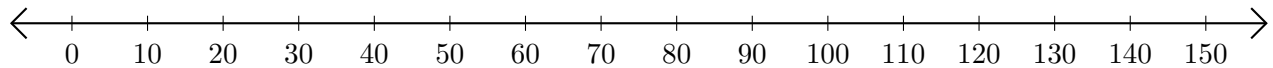
Adding and Subtracting on Number Lines (F)

Use the number lines to calculate each sum or difference.

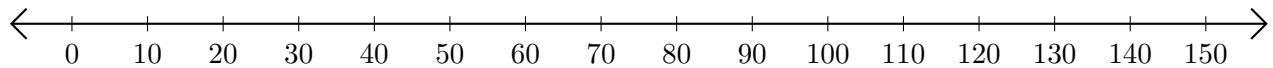
1. $120 + 30 = \underline{\hspace{2cm}}$



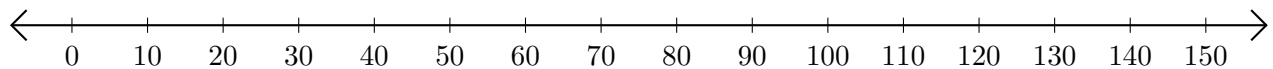
2. $60 - 50 = \underline{\hspace{2cm}}$



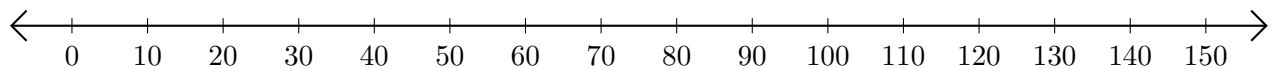
3. $10 + 140 = \underline{\hspace{2cm}}$



4. $150 - 90 = \underline{\hspace{2cm}}$



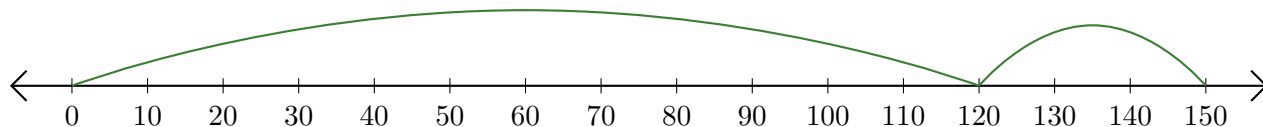
5. $140 - 110 = \underline{\hspace{2cm}}$



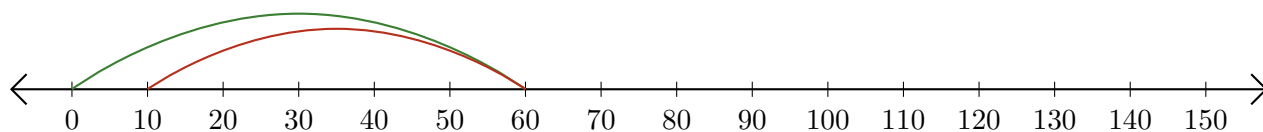
Adding and Subtracting on Number Lines (F) Answers

Use the number lines to calculate each sum or difference.

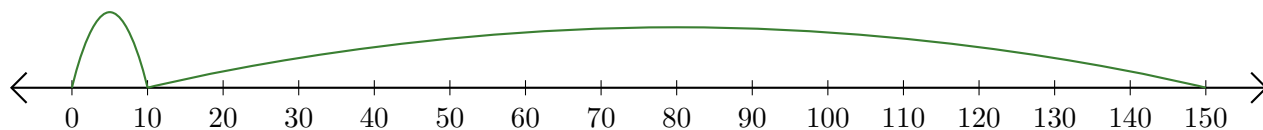
1. $120 + 30 = \underline{150}$



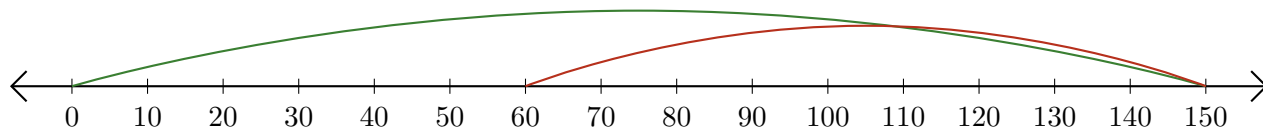
2. $60 - 50 = \underline{10}$



3. $10 + 140 = \underline{150}$



4. $150 - 90 = \underline{60}$



5. $140 - 110 = \underline{30}$

