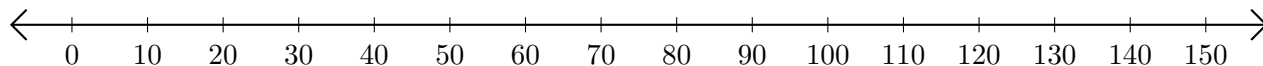


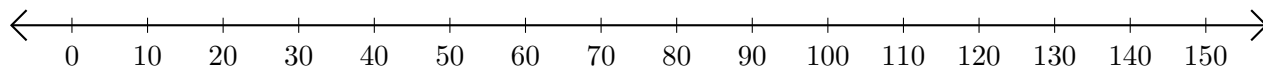
# Adding and Subtracting on Number Lines (D)

Use the number lines to calculate each sum or difference.

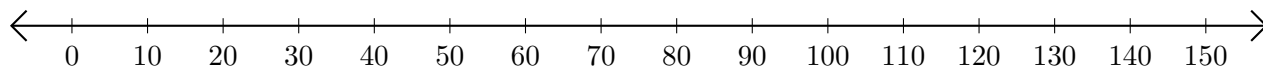
1.  $90 + 30 = \underline{\quad}$



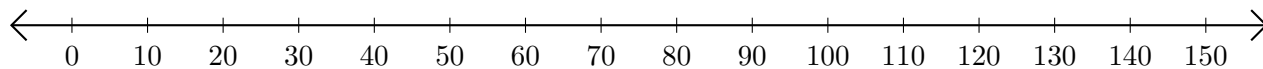
2.  $120 - 60 = \underline{\quad}$



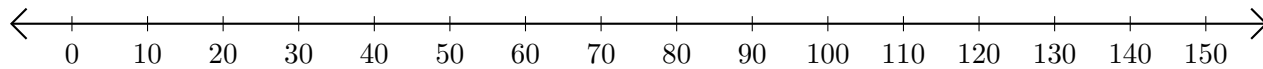
3.  $130 + 10 = \underline{\quad}$



4.  $150 - 120 = \underline{\quad}$



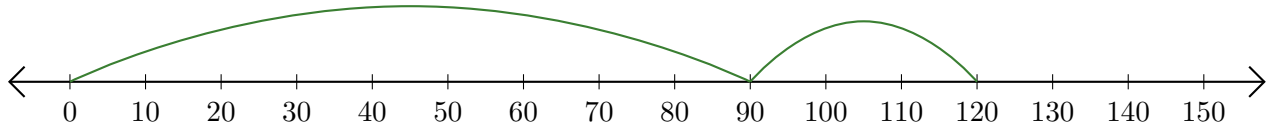
5.  $150 - 30 = \underline{\quad}$



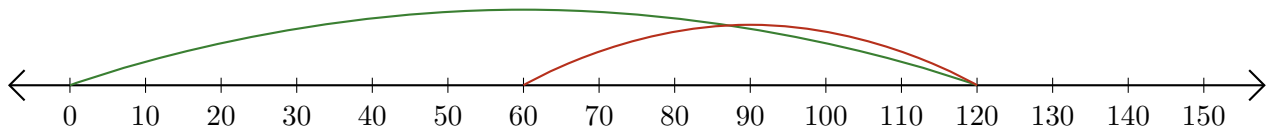
# Adding and Subtracting on Number Lines (D) Answers

Use the number lines to calculate each sum or difference.

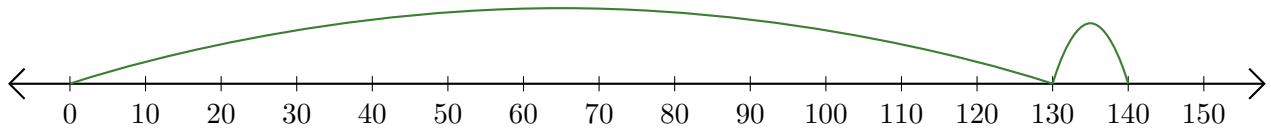
1.  $90 + 30 = \underline{120}$



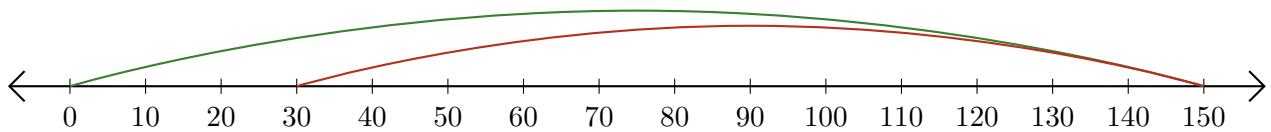
2.  $120 - 60 = \underline{60}$



3.  $130 + 10 = \underline{140}$



4.  $150 - 120 = \underline{30}$



5.  $150 - 30 = \underline{120}$

