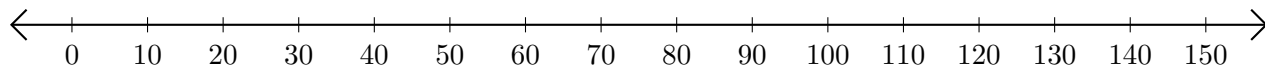


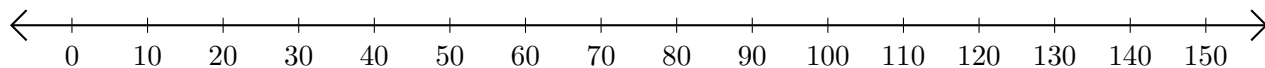
Adding and Subtracting on Number Lines (B)

Use the number lines to calculate each sum or difference.

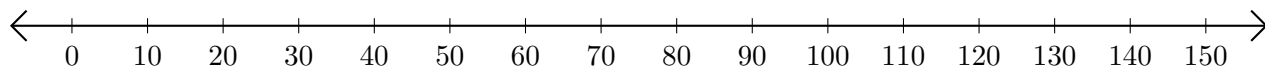
1. $20 + 80 = \underline{\hspace{2cm}}$



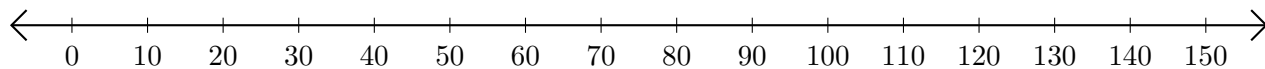
2. $70 - 10 = \underline{\hspace{2cm}}$



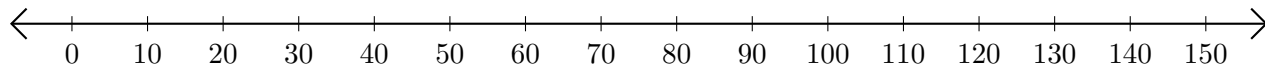
3. $130 + 20 = \underline{\hspace{2cm}}$



4. $130 - 90 = \underline{\hspace{2cm}}$



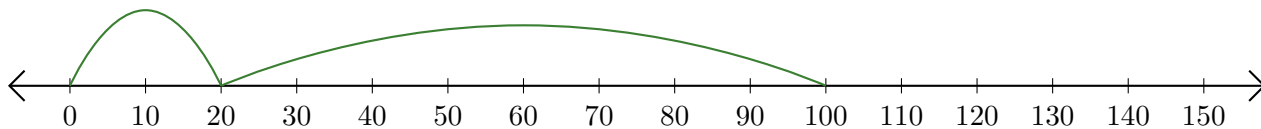
5. $60 + 70 = \underline{\hspace{2cm}}$



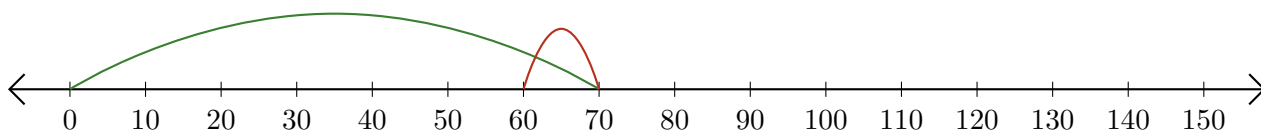
Adding and Subtracting on Number Lines (B) Answers

Use the number lines to calculate each sum or difference.

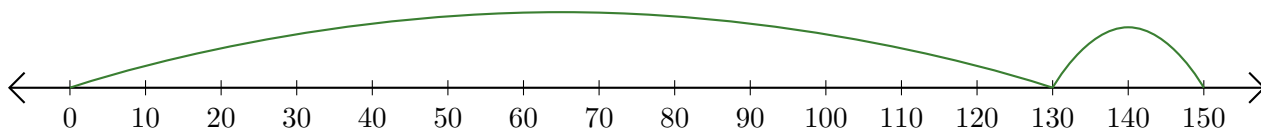
1. $20 + 80 = \underline{100}$



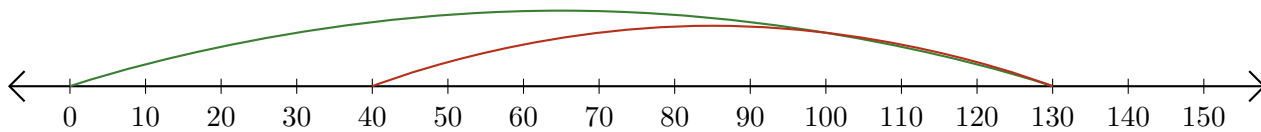
2. $70 - 10 = \underline{60}$



3. $130 + 20 = \underline{150}$



4. $130 - 90 = \underline{40}$



5. $60 + 70 = \underline{130}$

