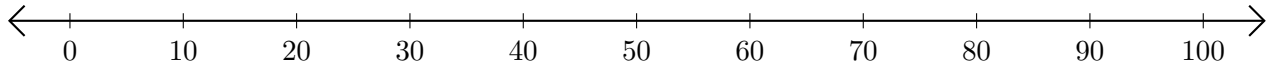


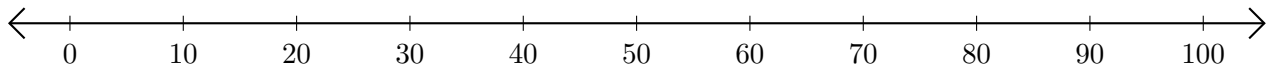
Adding and Subtracting on Number Lines (H)

Use the number lines to calculate each sum or difference.

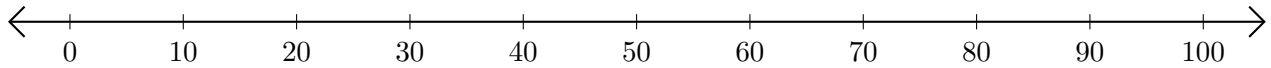
1. $50 + 30 = \underline{\quad}$



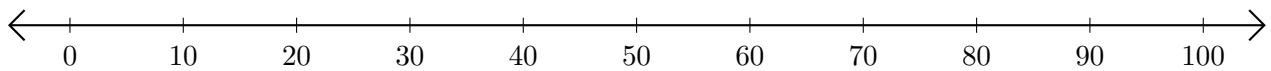
2. $90 - 60 = \underline{\quad}$



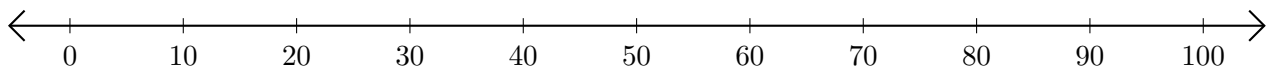
3. $20 + 20 = \underline{\quad}$



4. $100 - 40 = \underline{\quad}$



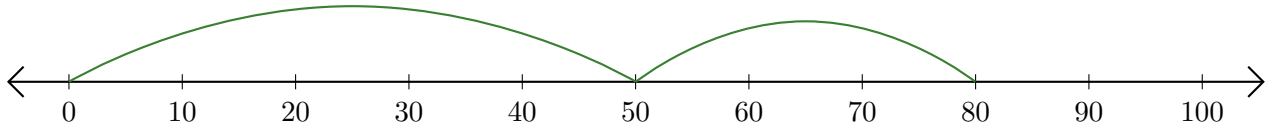
5. $100 - 90 = \underline{\quad}$



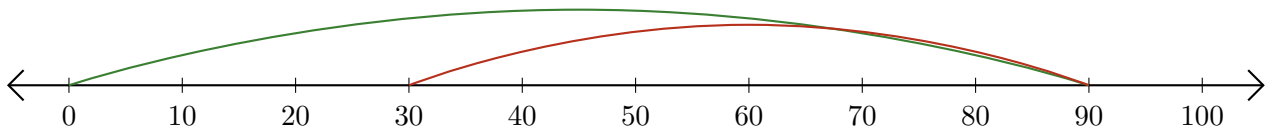
Adding and Subtracting on Number Lines (H) Answers

Use the number lines to calculate each sum or difference.

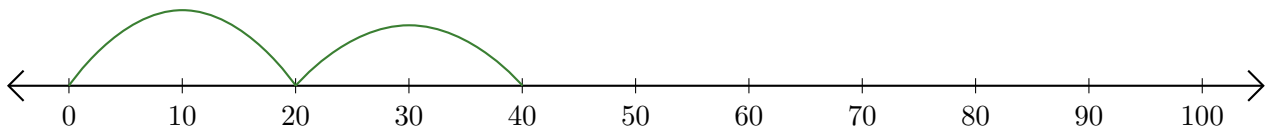
1. $50 + 30 = \underline{80}$



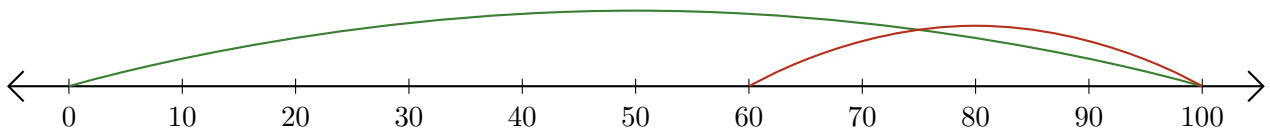
2. $90 - 60 = \underline{30}$



3. $20 + 20 = \underline{40}$



4. $100 - 40 = \underline{60}$



5. $100 - 90 = \underline{10}$

