

Adding and Subtracting on Number Lines (D)

Use the number lines to calculate each sum or difference.

1. $40 + 40 = \underline{\quad}$



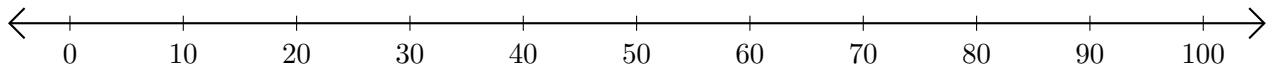
2. $90 - 20 = \underline{\quad}$



3. $50 + 40 = \underline{\quad}$



4. $60 - 10 = \underline{\quad}$



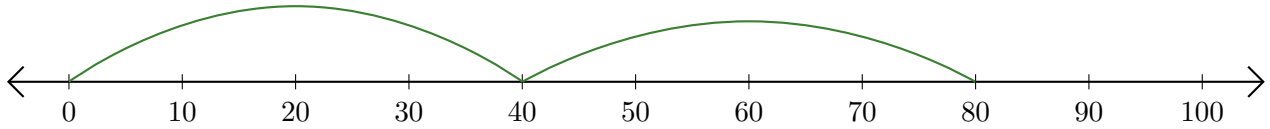
5. $80 + 10 = \underline{\quad}$



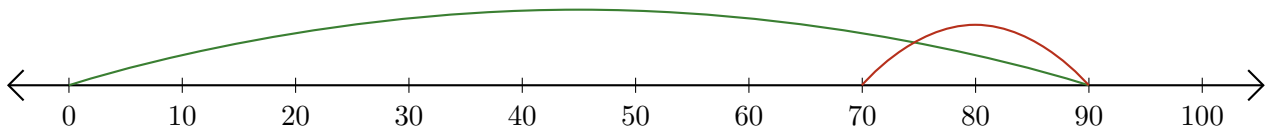
Adding and Subtracting on Number Lines (D) Answers

Use the number lines to calculate each sum or difference.

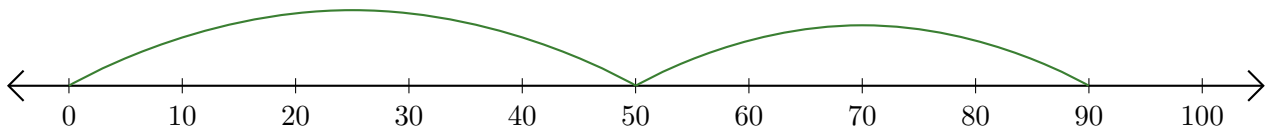
1. $40 + 40 = \underline{80}$



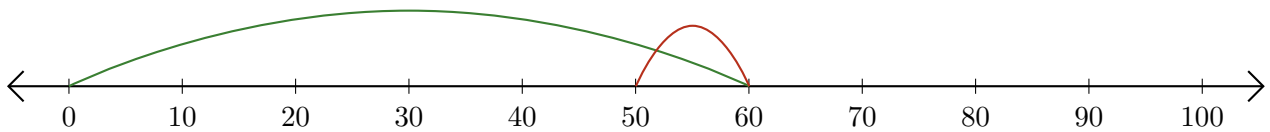
2. $90 - 20 = \underline{70}$



3. $50 + 40 = \underline{90}$



4. $60 - 10 = \underline{50}$



5. $80 + 10 = \underline{90}$

