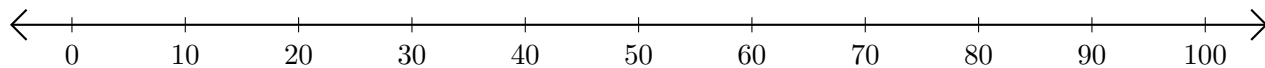


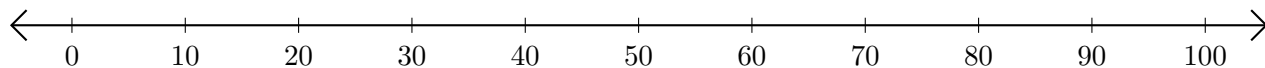
Adding and Subtracting on Number Lines (C)

Use the number lines to calculate each sum or difference.

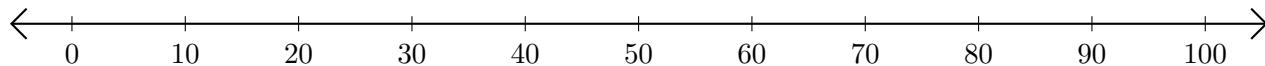
1. $10 + 40 = \underline{\quad}$



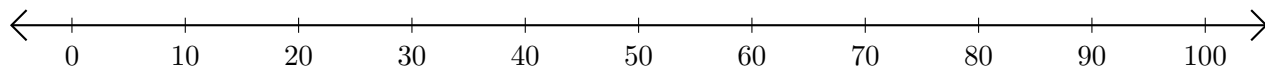
2. $90 - 40 = \underline{\quad}$



3. $20 + 80 = \underline{\quad}$



4. $100 - 90 = \underline{\quad}$



5. $80 + 20 = \underline{\quad}$

