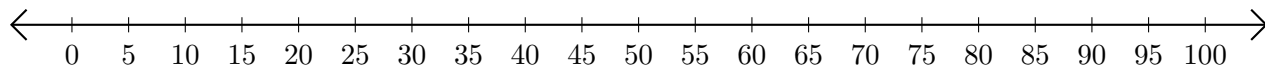


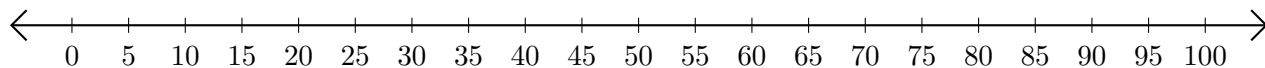
Adding and Subtracting on Number Lines (H)

Use the number lines to calculate each sum or difference.

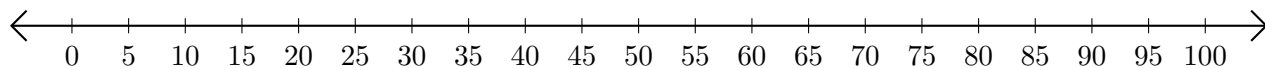
1. $15 + 50 = \underline{\quad}$



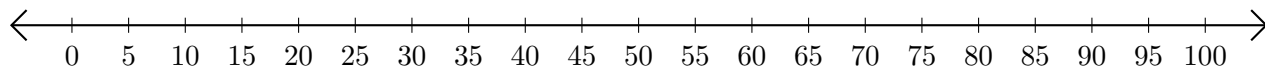
2. $85 - 50 = \underline{\quad}$



3. $40 + 25 = \underline{\quad}$



4. $85 - 80 = \underline{\quad}$



5. $55 + 25 = \underline{\quad}$

