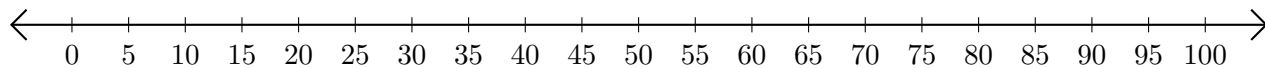


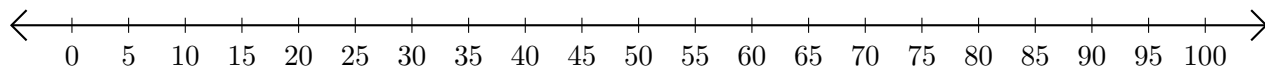
Adding and Subtracting on Number Lines (G)

Use the number lines to calculate each sum or difference.

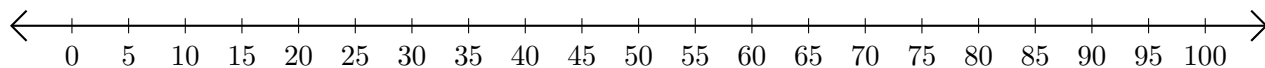
1. $75 + 15 = \underline{\quad}$



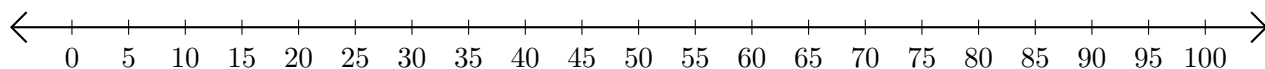
2. $95 - 80 = \underline{\quad}$



3. $15 + 25 = \underline{\quad}$



4. $35 - 30 = \underline{\quad}$



5. $70 + 10 = \underline{\quad}$

