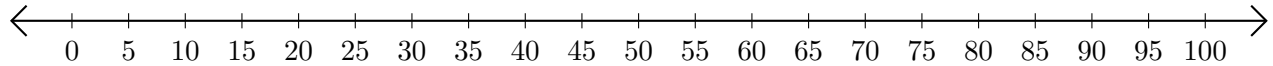


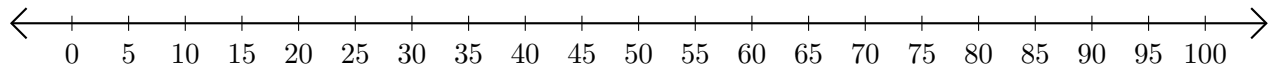
# Adding and Subtracting on Number Lines (G)

Use the number lines to calculate each sum or difference.

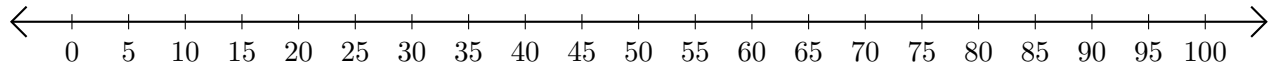
1.  $75 + 15 = \underline{\quad}$



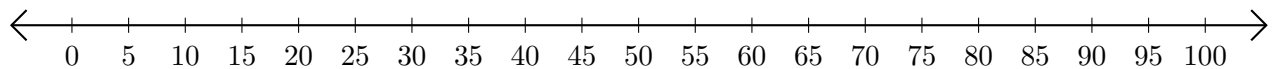
2.  $95 - 80 = \underline{\quad}$



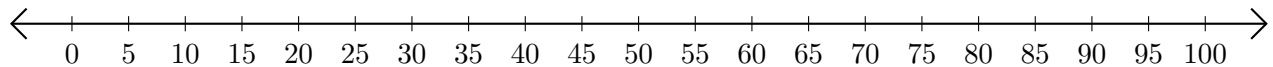
3.  $15 + 25 = \underline{\quad}$



4.  $35 - 30 = \underline{\quad}$



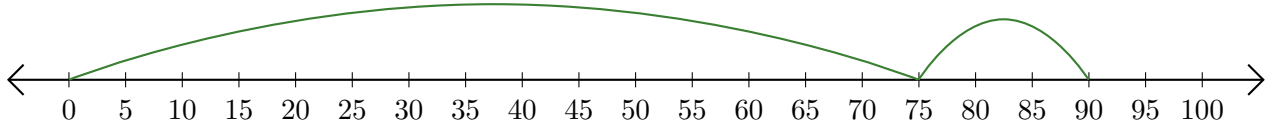
5.  $70 + 10 = \underline{\quad}$



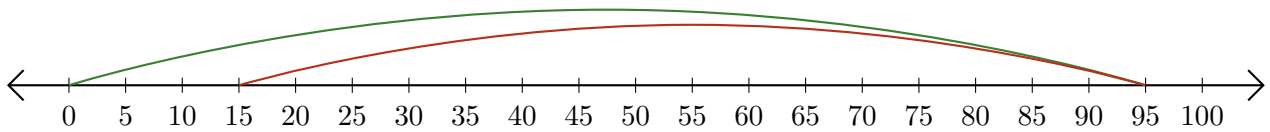
# Adding and Subtracting on Number Lines (G) Answers

Use the number lines to calculate each sum or difference.

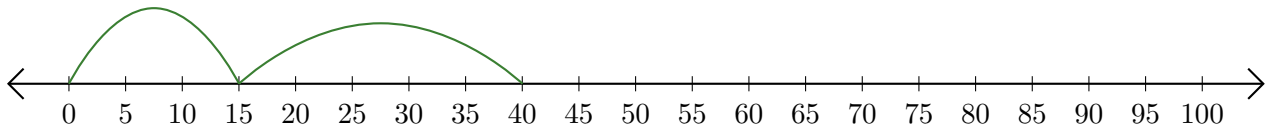
1.  $75 + 15 = \underline{90}$



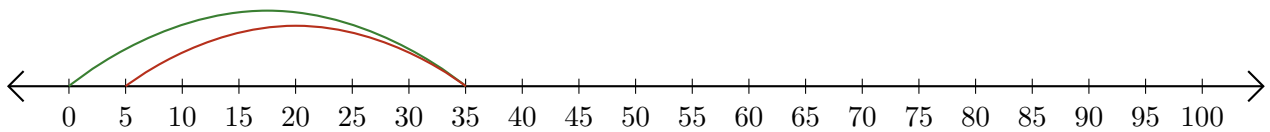
2.  $95 - 80 = \underline{15}$



3.  $15 + 25 = \underline{40}$



4.  $35 - 30 = \underline{5}$



5.  $70 + 10 = \underline{80}$

