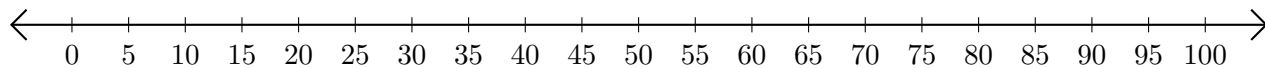


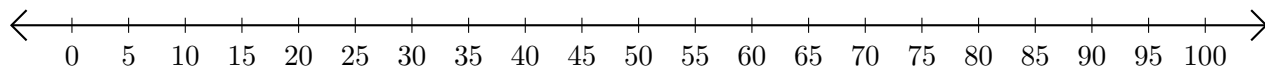
Adding and Subtracting on Number Lines (B)

Use the number lines to calculate each sum or difference.

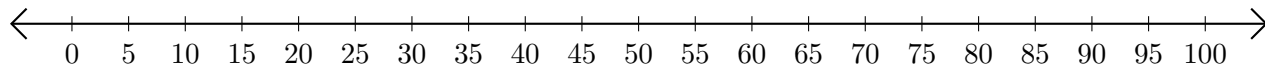
1. $30 + 70 = \underline{\hspace{2cm}}$



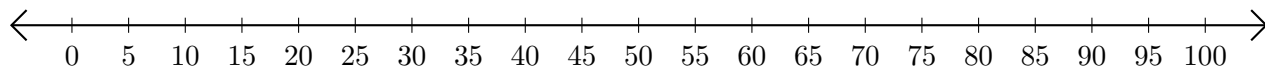
2. $55 - 45 = \underline{\hspace{2cm}}$



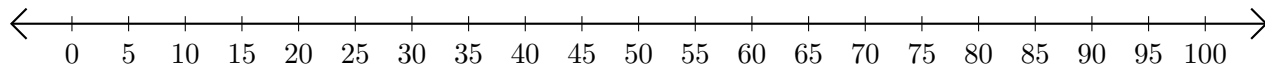
3. $75 + 20 = \underline{\hspace{2cm}}$



4. $35 - 25 = \underline{\hspace{2cm}}$



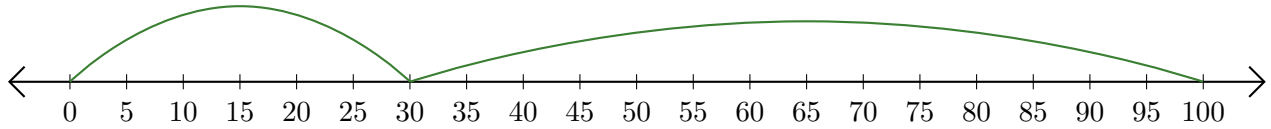
5. $100 - 5 = \underline{\hspace{2cm}}$



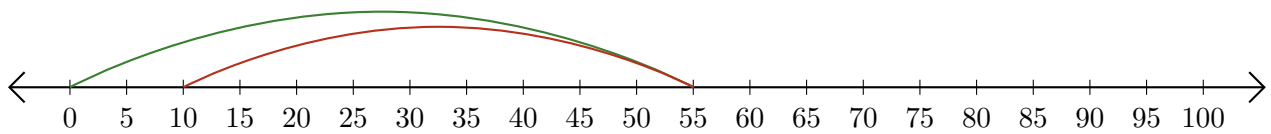
Adding and Subtracting on Number Lines (B) Answers

Use the number lines to calculate each sum or difference.

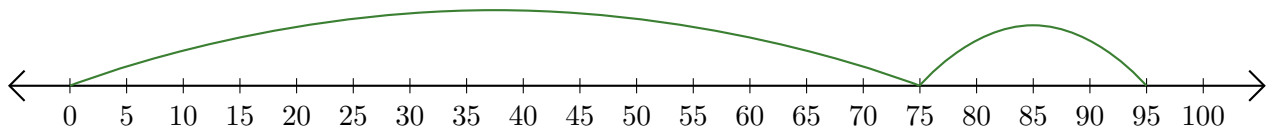
1. $30 + 70 = \underline{100}$



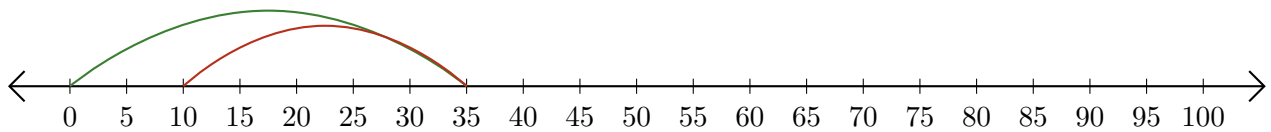
2. $55 - 45 = \underline{10}$



3. $75 + 20 = \underline{95}$



4. $35 - 25 = \underline{10}$



5. $100 - 5 = \underline{95}$

