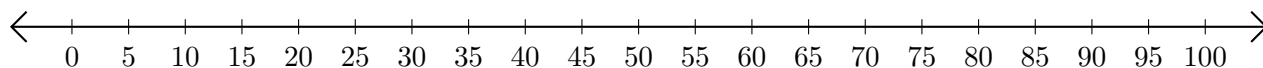


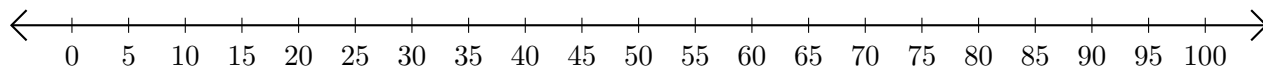
Adding and Subtracting on Number Lines (A)

Use the number lines to calculate each sum or difference.

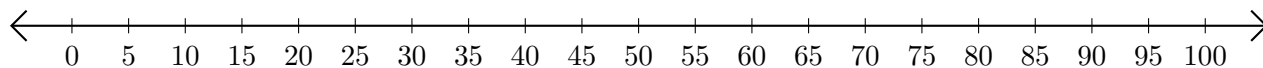
1. $10 + 55 = \underline{\quad}$



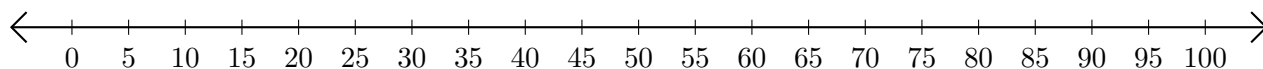
2. $45 - 30 = \underline{\quad}$



3. $40 + 45 = \underline{\quad}$



4. $90 - 55 = \underline{\quad}$



5. $80 - 70 = \underline{\quad}$

