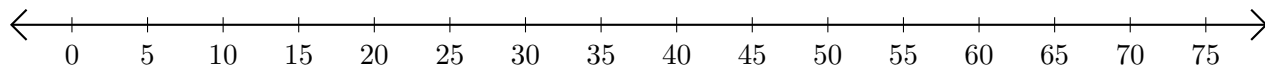


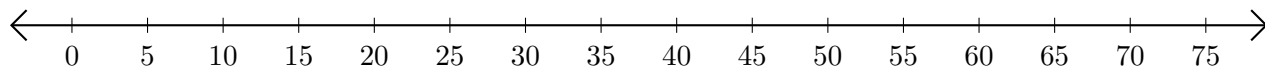
Adding and Subtracting on Number Lines (J)

Use the number lines to calculate each sum or difference.

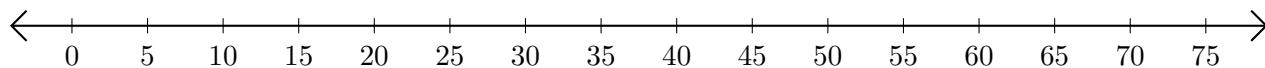
1. $50 + 5 = \underline{\quad}$



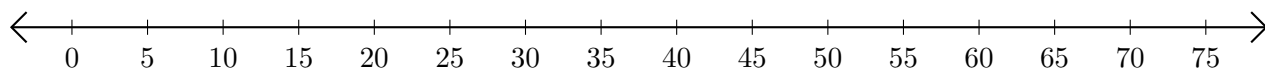
2. $75 - 30 = \underline{\quad}$



3. $65 + 5 = \underline{\quad}$



4. $45 - 40 = \underline{\quad}$



5. $35 - 25 = \underline{\quad}$

