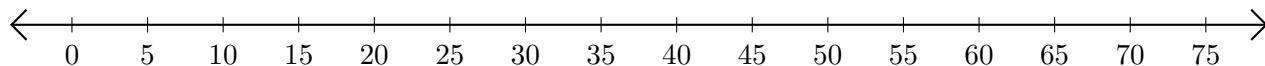


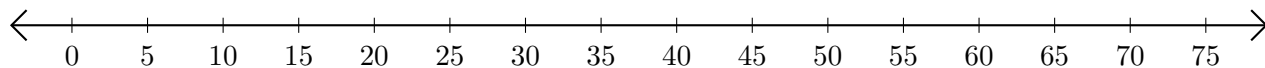
# Adding and Subtracting on Number Lines (H)

Use the number lines to calculate each sum or difference.

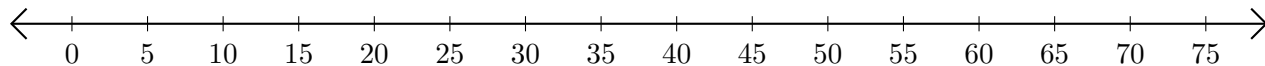
1.  $25 + 5 = \underline{\quad}$



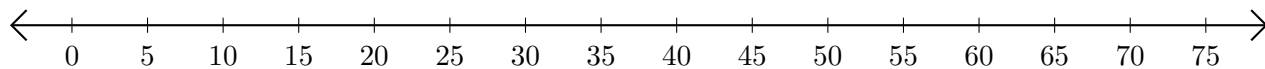
2.  $55 - 45 = \underline{\quad}$



3.  $60 + 15 = \underline{\quad}$



4.  $75 - 40 = \underline{\quad}$



5.  $70 + 5 = \underline{\quad}$

