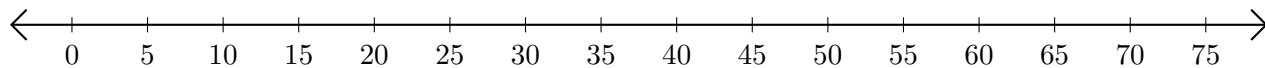


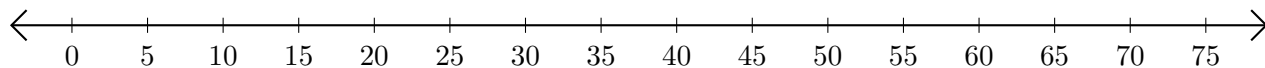
Adding and Subtracting on Number Lines (B)

Use the number lines to calculate each sum or difference.

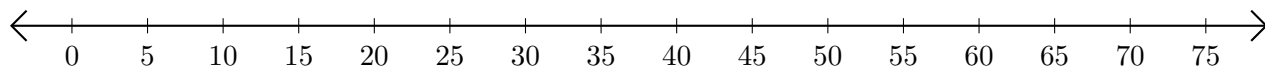
1. $30 + 20 = \underline{\quad}$



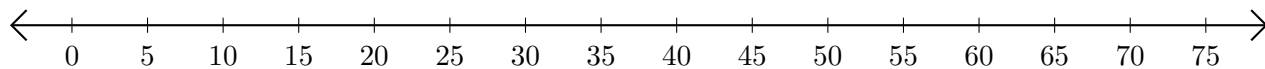
2. $40 - 35 = \underline{\quad}$



3. $45 + 25 = \underline{\quad}$



4. $75 - 70 = \underline{\quad}$



5. $65 + 10 = \underline{\quad}$

