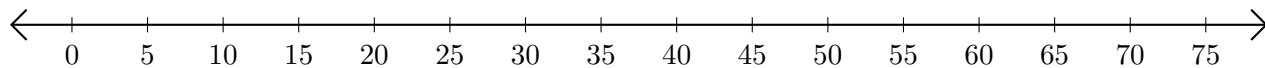


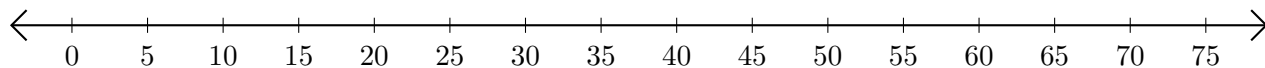
## Adding and Subtracting on Number Lines (B)

Use the number lines to calculate each sum or difference.

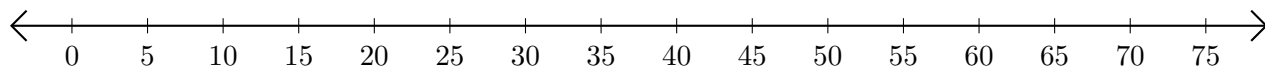
1.  $30 + 20 = \underline{\quad}$



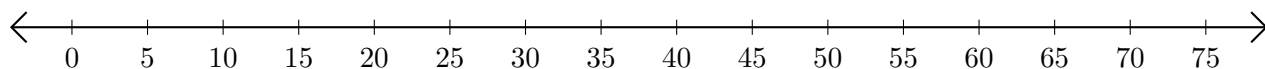
2.  $40 - 35 = \underline{\quad}$



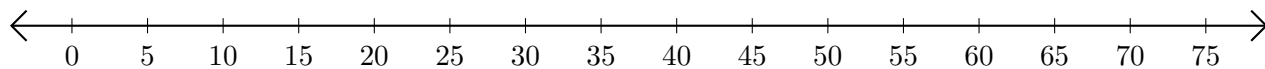
3.  $45 + 25 = \underline{\quad}$



4.  $75 - 70 = \underline{\quad}$



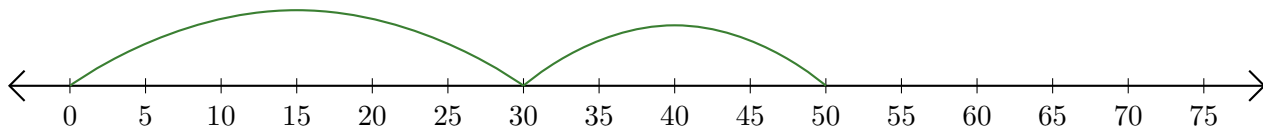
5.  $65 + 10 = \underline{\quad}$



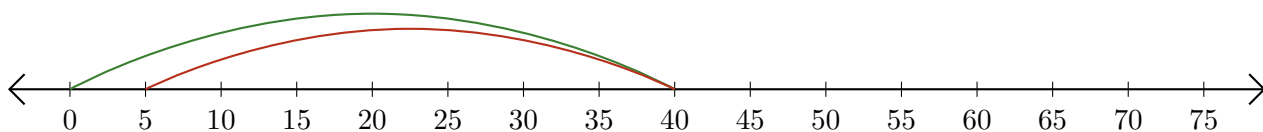
# Adding and Subtracting on Number Lines (B) Answers

Use the number lines to calculate each sum or difference.

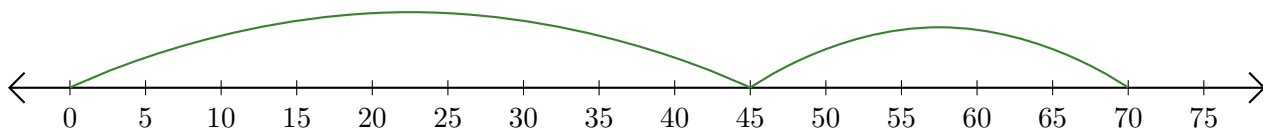
1.  $30 + 20 = \underline{50}$



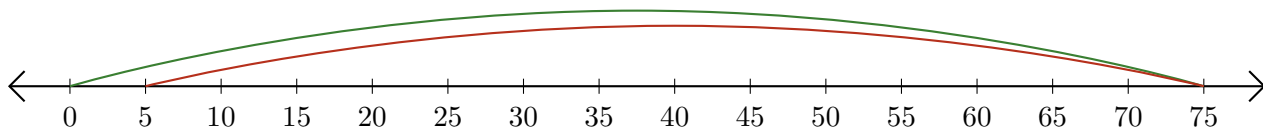
2.  $40 - 35 = \underline{5}$



3.  $45 + 25 = \underline{70}$



4.  $75 - 70 = \underline{5}$



5.  $65 + 10 = \underline{75}$

