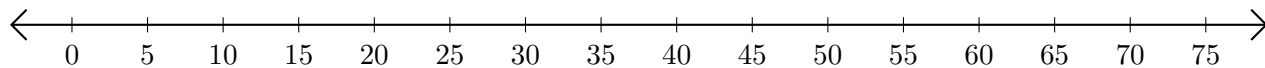


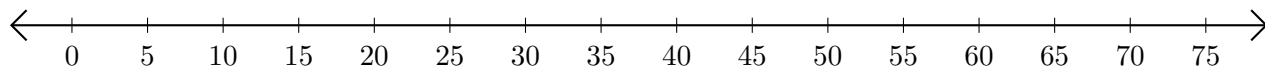
# Adding and Subtracting on Number Lines (A)

Use the number lines to calculate each sum or difference.

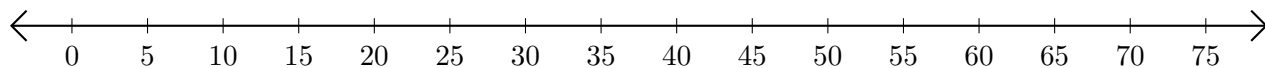
1.  $70 + 5 = \underline{\quad}$



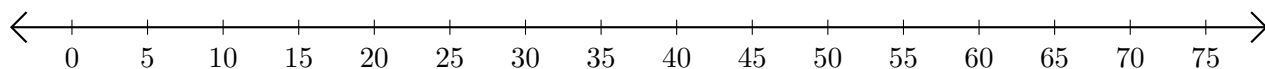
2.  $75 - 5 = \underline{\quad}$



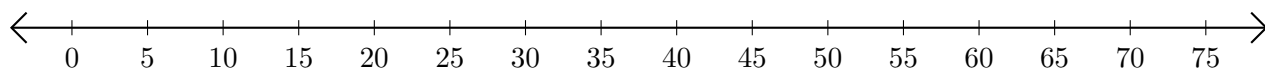
3.  $20 + 25 = \underline{\quad}$



4.  $55 - 15 = \underline{\quad}$



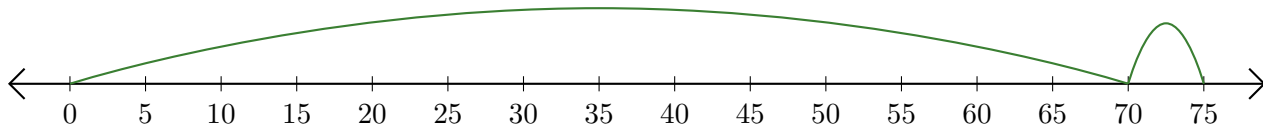
5.  $50 + 15 = \underline{\quad}$



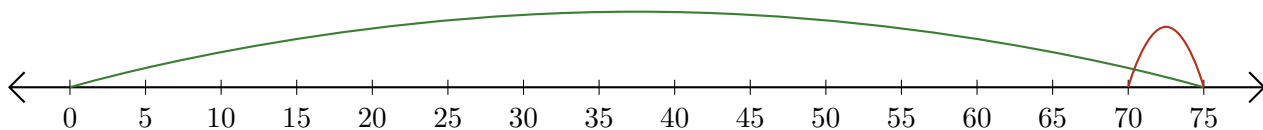
# Adding and Subtracting on Number Lines (A) Answers

Use the number lines to calculate each sum or difference.

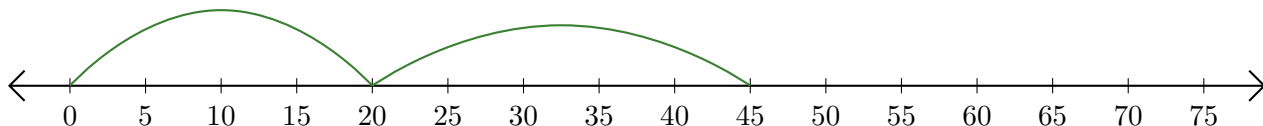
1.  $70 + 5 = \underline{75}$



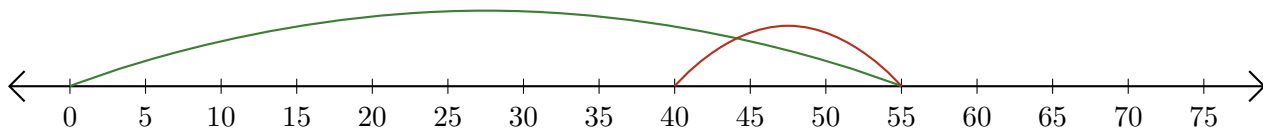
2.  $75 - 5 = \underline{70}$



3.  $20 + 25 = \underline{45}$



4.  $55 - 15 = \underline{40}$



5.  $50 + 15 = \underline{65}$

