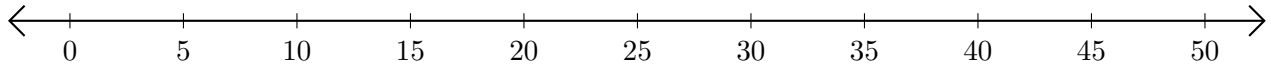


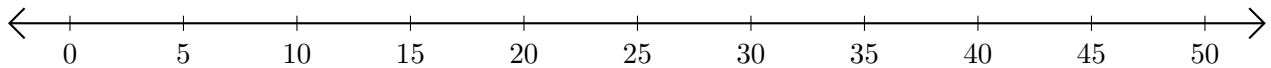
Adding and Subtracting on Number Lines (I)

Use the number lines to calculate each sum or difference.

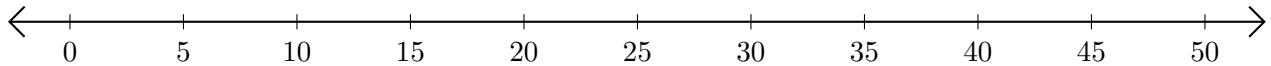
1. $35 + 15 = \underline{\quad}$



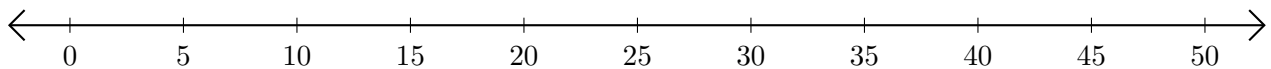
2. $50 - 20 = \underline{\quad}$



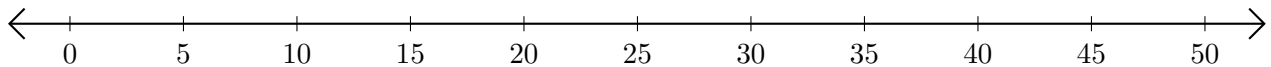
3. $5 + 15 = \underline{\quad}$



4. $50 - 30 = \underline{\quad}$



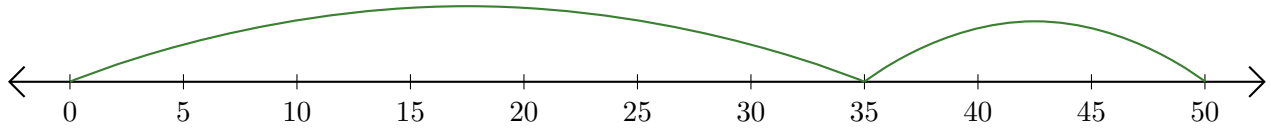
5. $10 + 35 = \underline{\quad}$



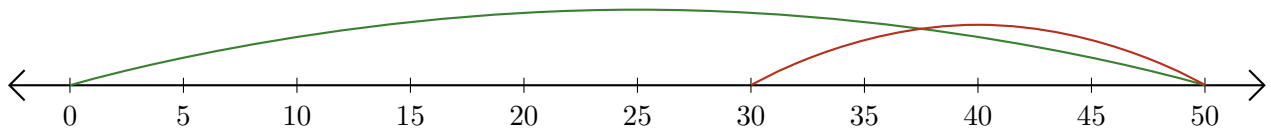
Adding and Subtracting on Number Lines (I) Answers

Use the number lines to calculate each sum or difference.

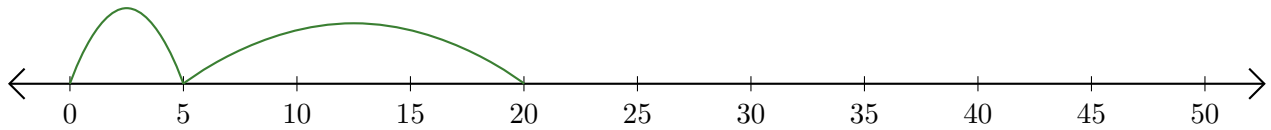
1. $35 + 15 = \underline{50}$



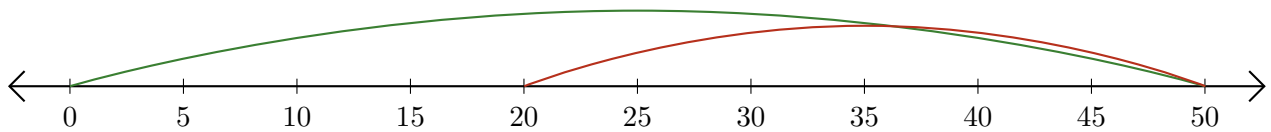
2. $50 - 20 = \underline{30}$



3. $5 + 15 = \underline{20}$



4. $50 - 30 = \underline{20}$



5. $10 + 35 = \underline{45}$

