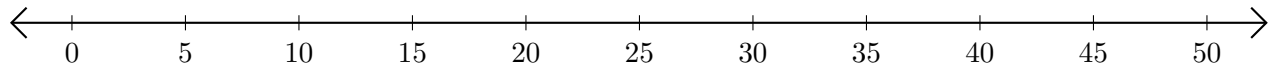


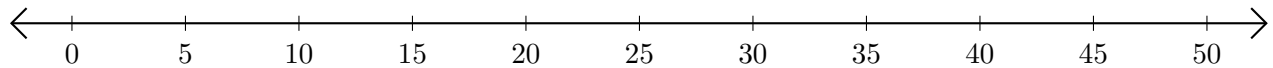
Adding and Subtracting on Number Lines (H)

Use the number lines to calculate each sum or difference.

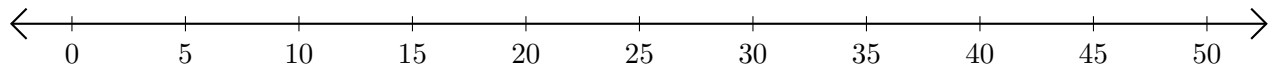
1. $15 + 30 = \underline{\quad}$



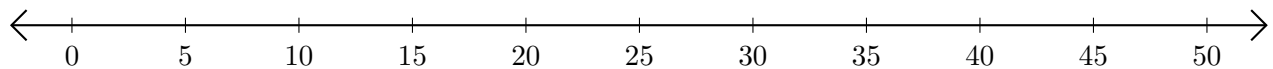
2. $45 - 40 = \underline{\quad}$



3. $30 + 10 = \underline{\quad}$



4. $50 - 45 = \underline{\quad}$



5. $35 - 25 = \underline{\quad}$

