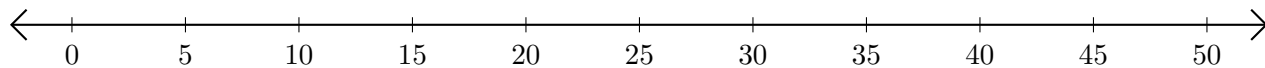


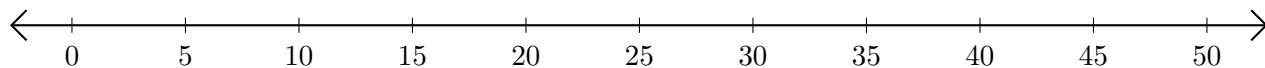
# Adding and Subtracting on Number Lines (A)

Use the number lines to calculate each sum or difference.

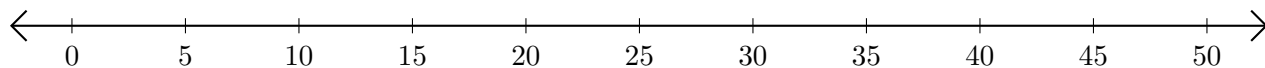
1.  $15 + 35 = \underline{\quad}$



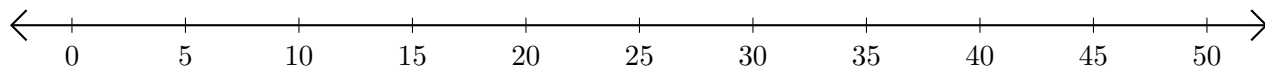
2.  $30 - 5 = \underline{\quad}$



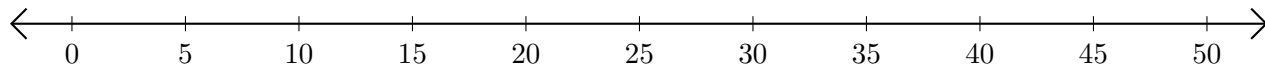
3.  $35 + 5 = \underline{\quad}$



4.  $50 - 45 = \underline{\quad}$



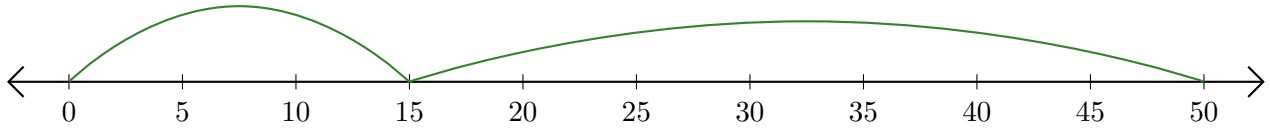
5.  $20 + 20 = \underline{\quad}$



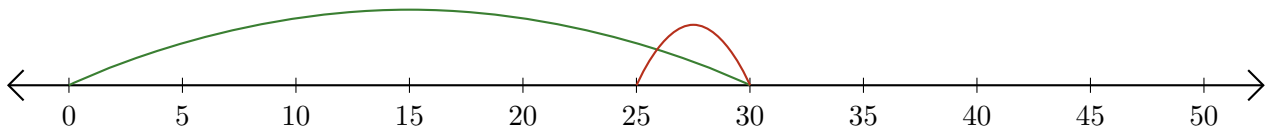
# Adding and Subtracting on Number Lines (A) Answers

Use the number lines to calculate each sum or difference.

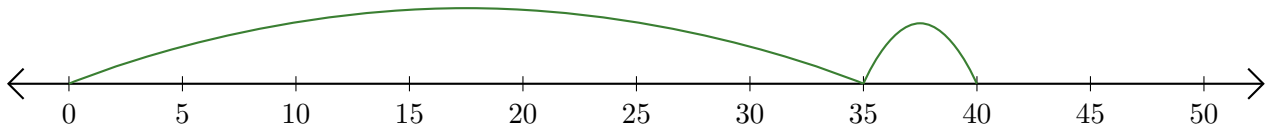
1.  $15 + 35 = \underline{50}$



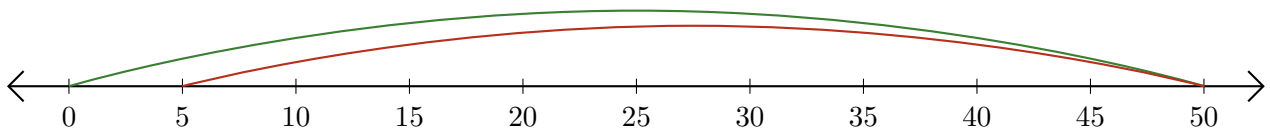
2.  $30 - 5 = \underline{25}$



3.  $35 + 5 = \underline{40}$



4.  $50 - 45 = \underline{5}$



5.  $20 + 20 = \underline{40}$

