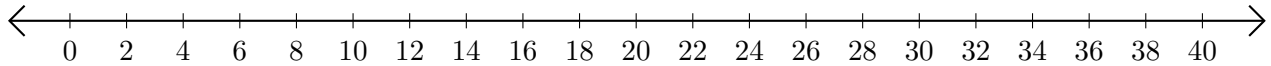


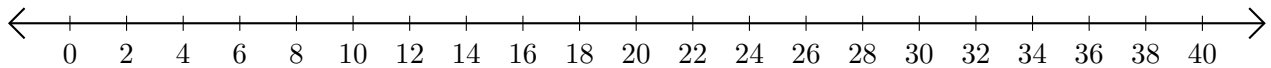
# Adding and Subtracting on Number Lines (J)

Use the number lines to calculate each sum or difference.

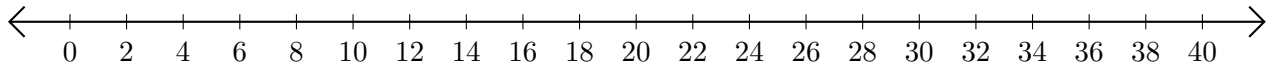
1.  $16 + 22 = \underline{\quad}$



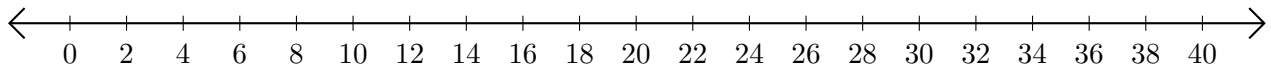
2.  $34 - 22 = \underline{\quad}$



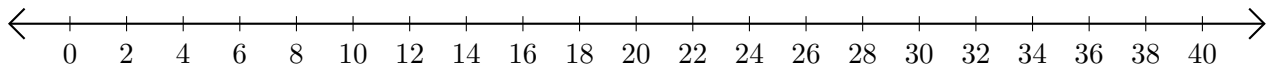
3.  $36 + 4 = \underline{\quad}$



4.  $38 - 20 = \underline{\quad}$



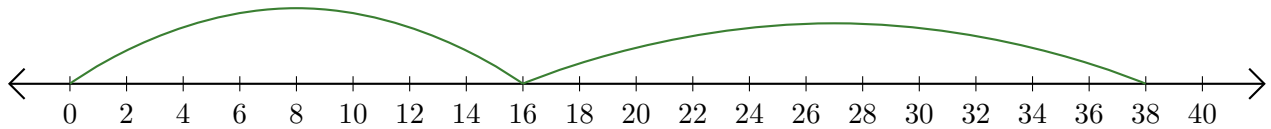
5.  $30 + 6 = \underline{\quad}$



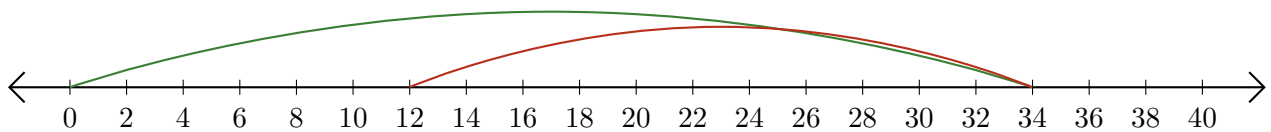
# Adding and Subtracting on Number Lines (J) Answers

Use the number lines to calculate each sum or difference.

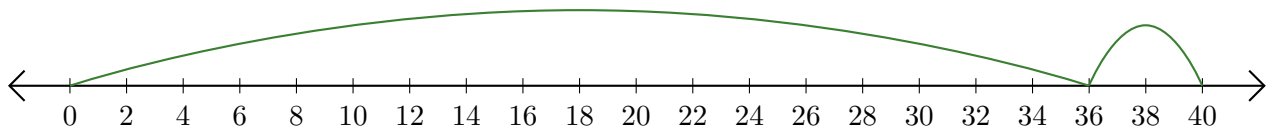
1.  $16 + 22 = \underline{38}$



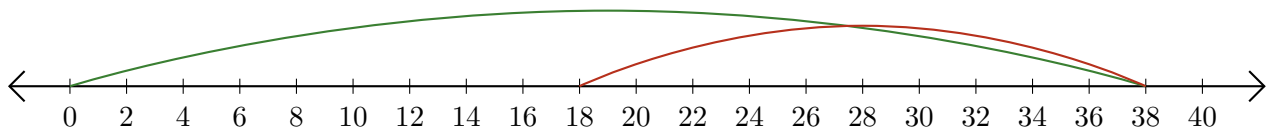
2.  $34 - 22 = \underline{12}$



3.  $36 + 4 = \underline{40}$



4.  $38 - 20 = \underline{18}$



5.  $30 + 6 = \underline{36}$

