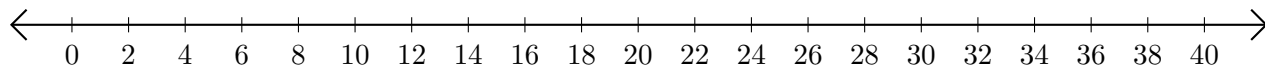


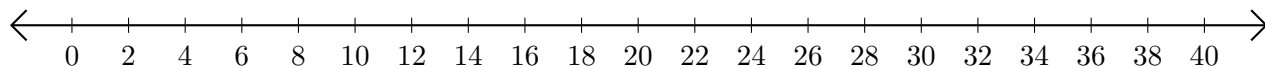
# Adding and Subtracting on Number Lines (H)

Use the number lines to calculate each sum or difference.

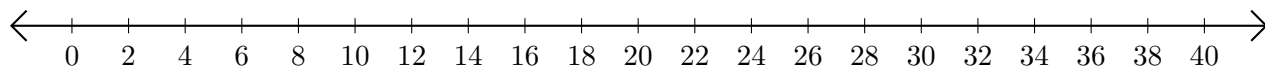
1.  $12 + 2 = \underline{\quad}$



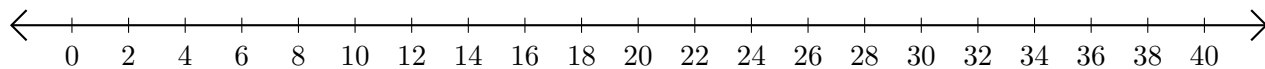
2.  $24 - 20 = \underline{\quad}$



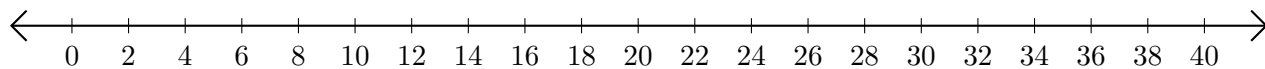
3.  $30 + 6 = \underline{\quad}$



4.  $32 - 22 = \underline{\quad}$



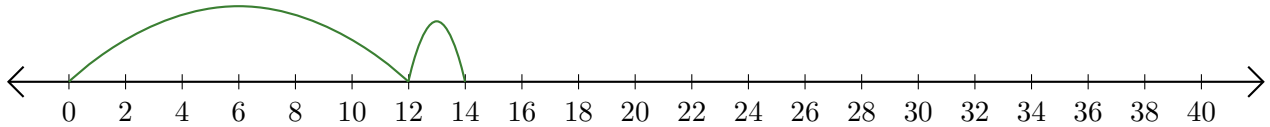
5.  $34 - 32 = \underline{\quad}$



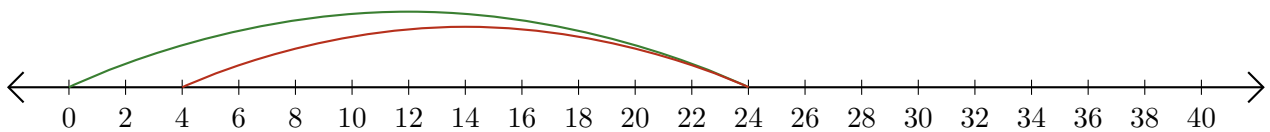
# Adding and Subtracting on Number Lines (H) Answers

Use the number lines to calculate each sum or difference.

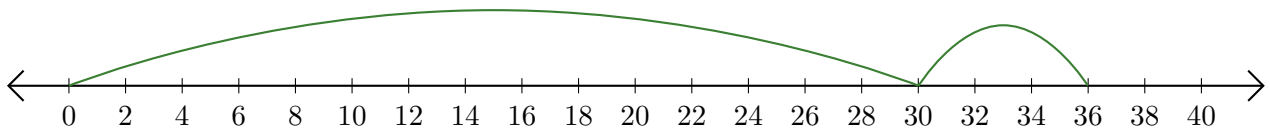
1.  $12 + 2 = \underline{14}$



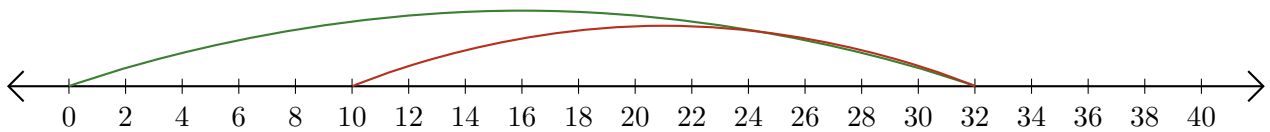
2.  $24 - 20 = \underline{4}$



3.  $30 + 6 = \underline{36}$



4.  $32 - 22 = \underline{10}$



5.  $34 - 32 = \underline{2}$

