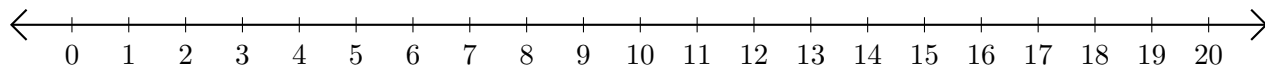


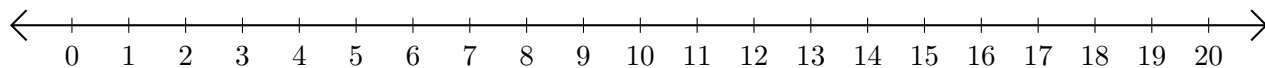
Adding and Subtracting on Number Lines (A)

Use the number lines to calculate each sum or difference.

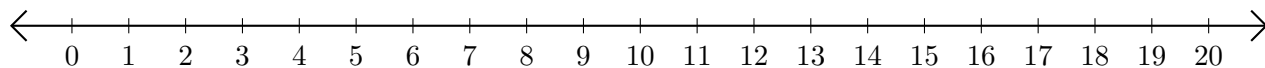
1. $7 + 7 = \underline{\quad}$



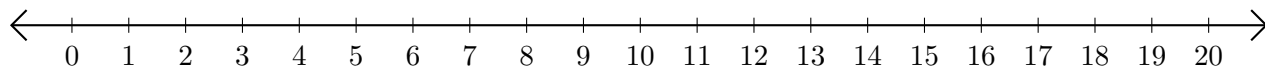
2. $16 - 11 = \underline{\quad}$



3. $5 + 7 = \underline{\quad}$



4. $16 - 13 = \underline{\quad}$



5. $9 + 8 = \underline{\quad}$

