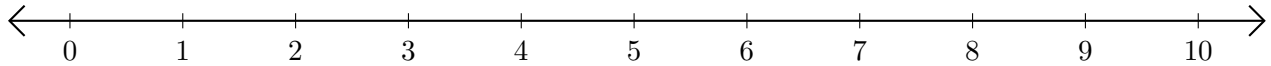


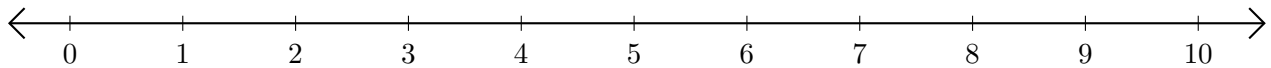
Adding and Subtracting on Number Lines (J)

Use the number lines to calculate each sum or difference.

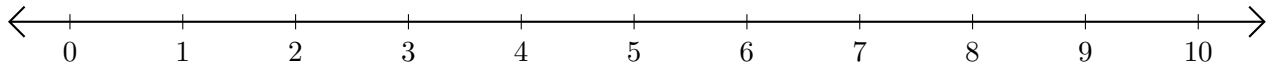
1. $9 + 1 = \underline{\quad}$



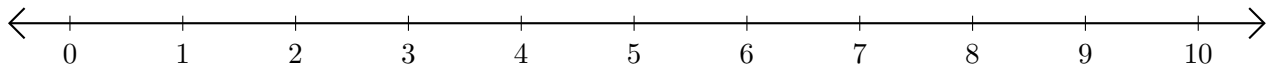
2. $7 - 2 = \underline{\quad}$



3. $1 + 2 = \underline{\quad}$



4. $6 - 5 = \underline{\quad}$



5. $7 - 4 = \underline{\quad}$

