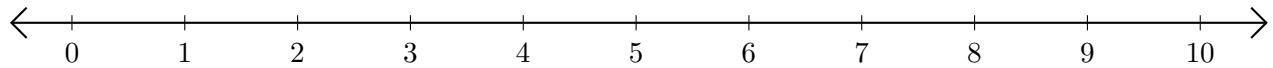


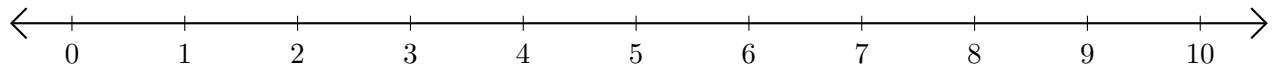
Adding and Subtracting on Number Lines (J)

Use the number lines to calculate each sum or difference.

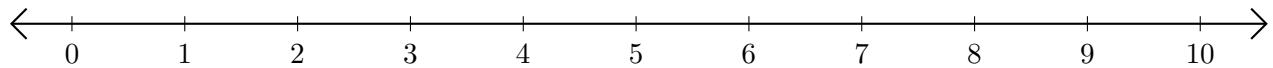
1. $9 + 1 = \underline{\quad}$



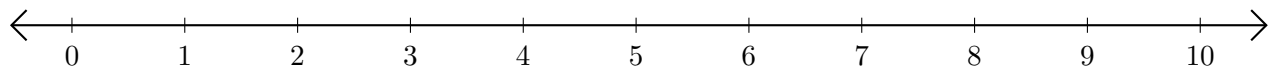
2. $7 - 2 = \underline{\quad}$



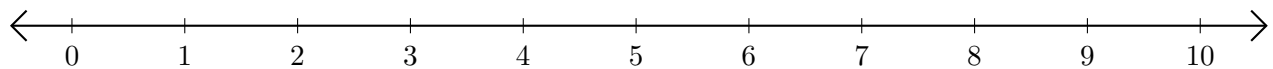
3. $1 + 2 = \underline{\quad}$



4. $6 - 5 = \underline{\quad}$



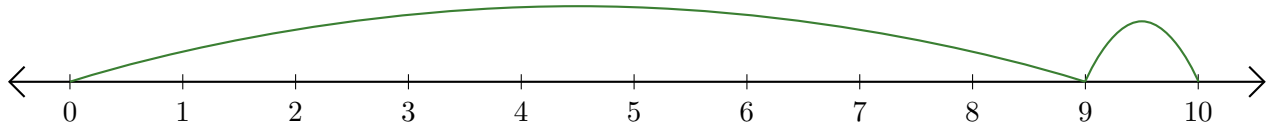
5. $7 - 4 = \underline{\quad}$



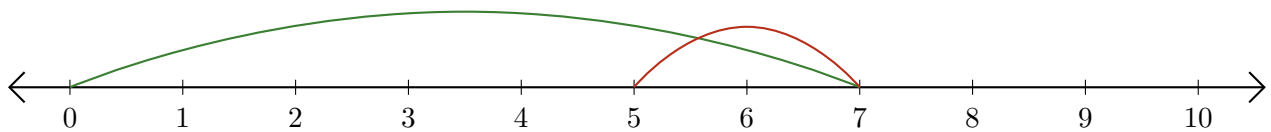
Adding and Subtracting on Number Lines (J) Answers

Use the number lines to calculate each sum or difference.

1. $9 + 1 = \underline{10}$



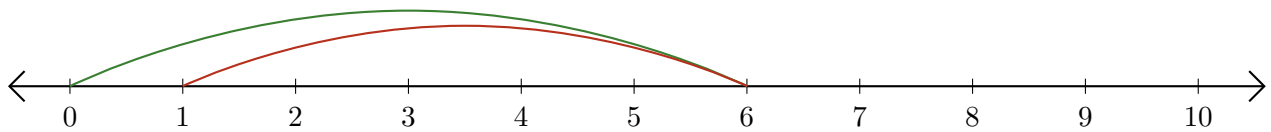
2. $7 - 2 = \underline{5}$



3. $1 + 2 = \underline{3}$



4. $6 - 5 = \underline{1}$



5. $7 - 4 = \underline{3}$

