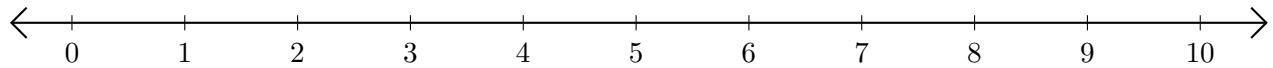


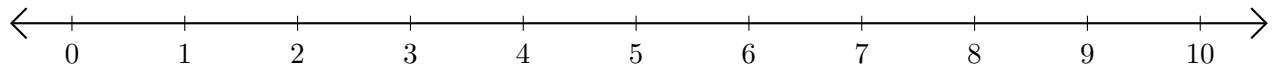
Adding and Subtracting on Number Lines (I)

Use the number lines to calculate each sum or difference.

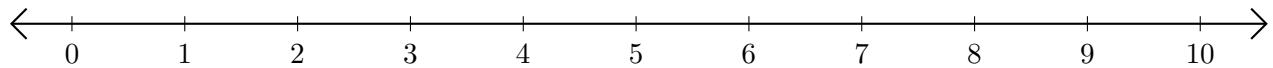
1. $6 + 3 = \underline{\quad}$



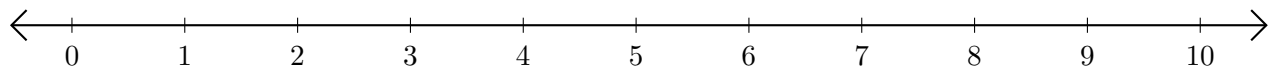
2. $8 - 7 = \underline{\quad}$



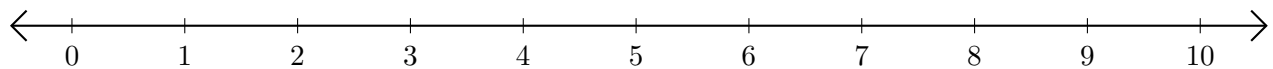
3. $3 + 3 = \underline{\quad}$



4. $9 - 8 = \underline{\quad}$



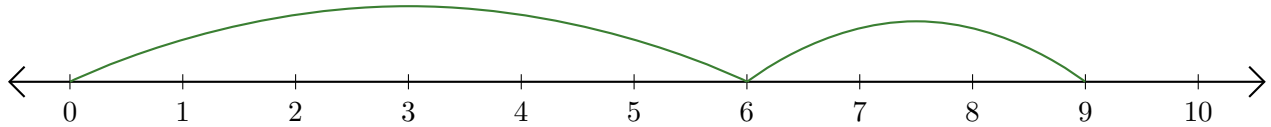
5. $10 - 4 = \underline{\quad}$



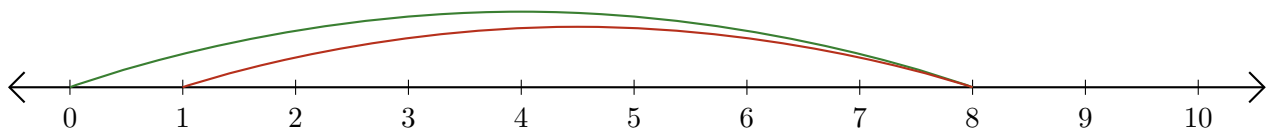
Adding and Subtracting on Number Lines (I) Answers

Use the number lines to calculate each sum or difference.

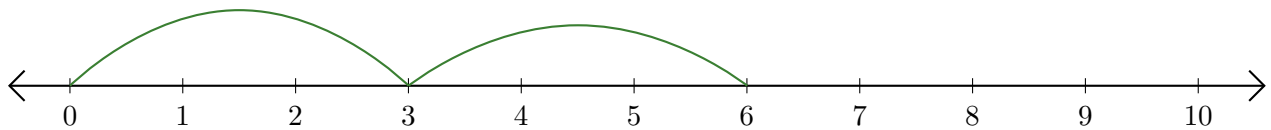
1. $6 + 3 = \underline{9}$



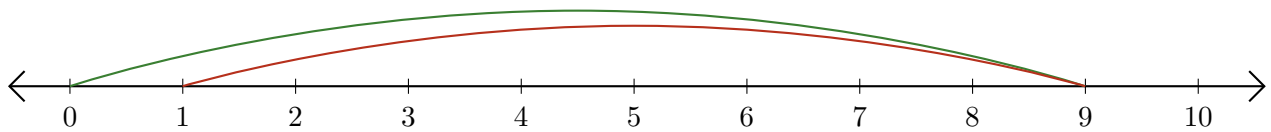
2. $8 - 7 = \underline{1}$



3. $3 + 3 = \underline{6}$



4. $9 - 8 = \underline{1}$



5. $10 - 4 = \underline{6}$

