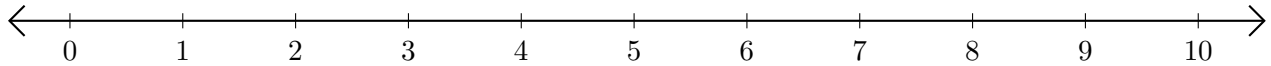


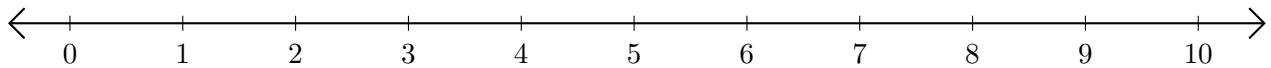
Adding and Subtracting on Number Lines (E)

Use the number lines to calculate each sum or difference.

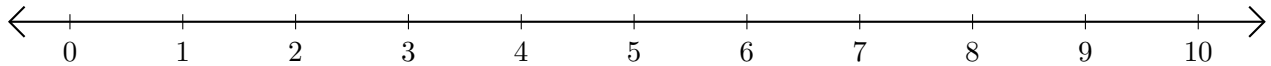
1. $1 + 4 = \underline{\quad}$



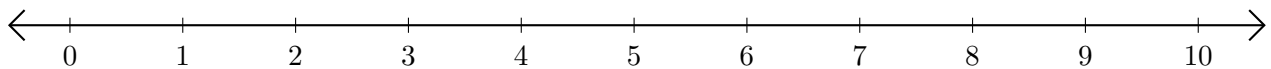
2. $10 - 3 = \underline{\quad}$



3. $6 + 4 = \underline{\quad}$



4. $7 - 5 = \underline{\quad}$



5. $10 - 8 = \underline{\quad}$

