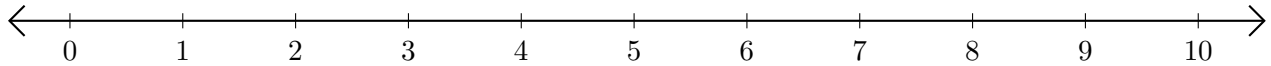


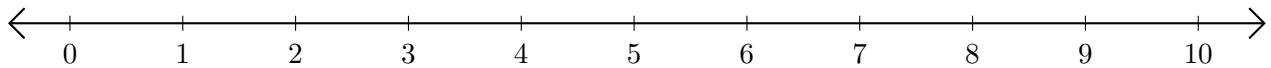
# Adding and Subtracting on Number Lines (E)

Use the number lines to calculate each sum or difference.

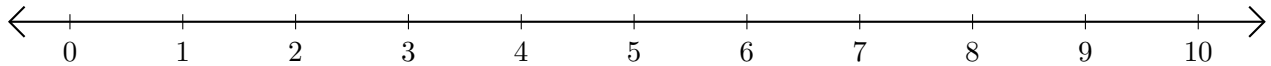
1.  $1 + 4 = \underline{\quad}$



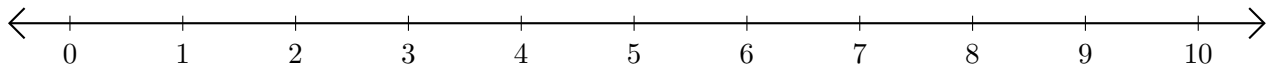
2.  $10 - 3 = \underline{\quad}$



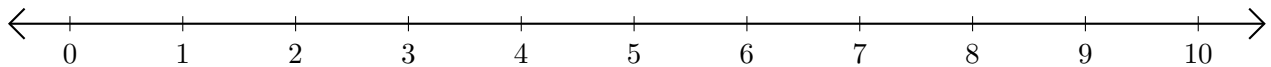
3.  $6 + 4 = \underline{\quad}$



4.  $7 - 5 = \underline{\quad}$



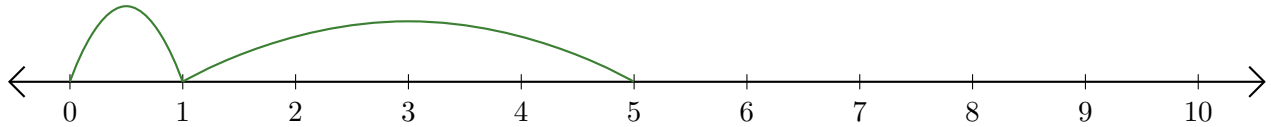
5.  $10 - 8 = \underline{\quad}$



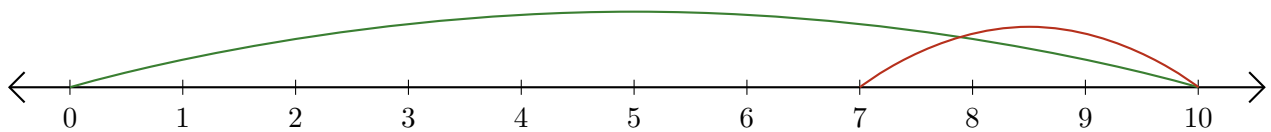
# Adding and Subtracting on Number Lines (E) Answers

Use the number lines to calculate each sum or difference.

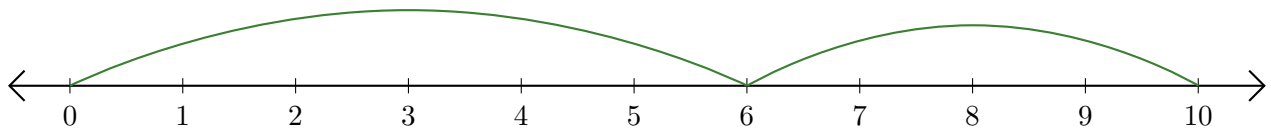
1.  $1 + 4 = \underline{5}$



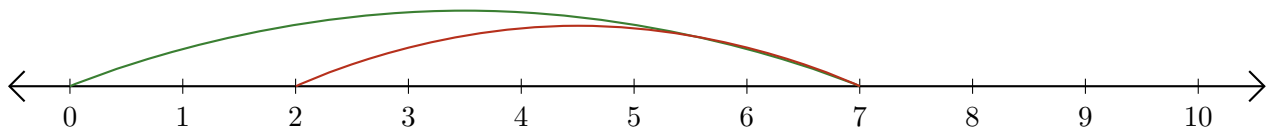
2.  $10 - 3 = \underline{7}$



3.  $6 + 4 = \underline{10}$



4.  $7 - 5 = \underline{2}$



5.  $10 - 8 = \underline{2}$

