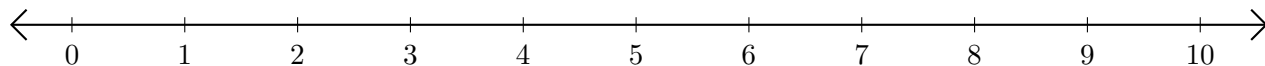


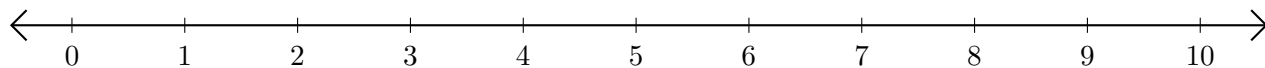
Adding and Subtracting on Number Lines (D)

Use the number lines to calculate each sum or difference.

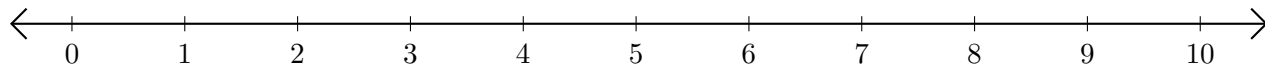
1. $2 + 6 = \underline{\quad}$



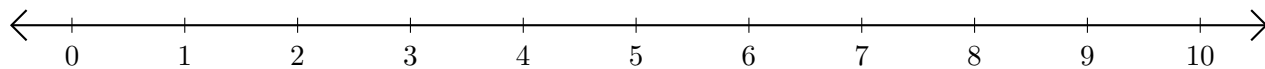
2. $10 - 6 = \underline{\quad}$



3. $8 + 2 = \underline{\quad}$



4. $10 - 5 = \underline{\quad}$



5. $7 + 1 = \underline{\quad}$

